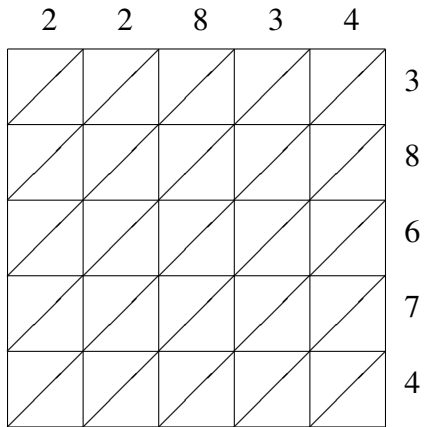
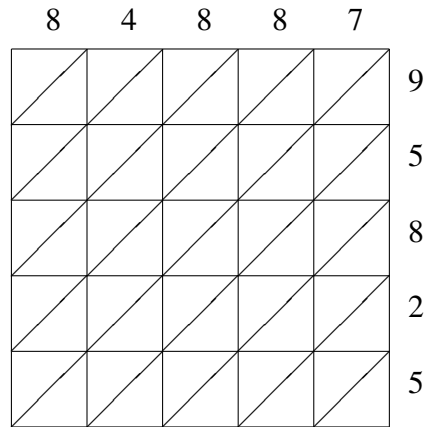


## Lattice Multiplication (D)

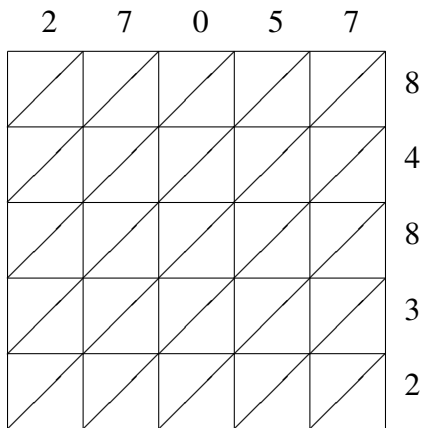
Use lattice multiplication to find each product.



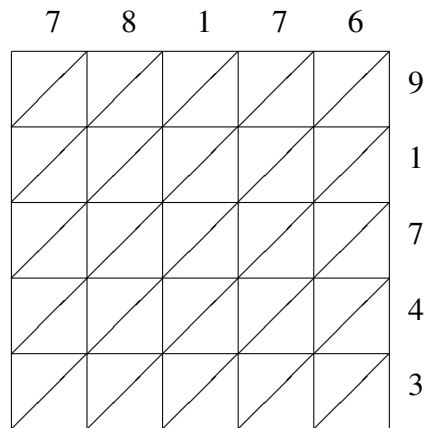
$$22834 \times 38674 = \underline{\hspace{2cm}}$$



$$84887 \times 95825 = \underline{\hspace{2cm}}$$



$$27057 \times 84832 = \underline{\hspace{2cm}}$$



$$78176 \times 91743 = \underline{\hspace{2cm}}$$