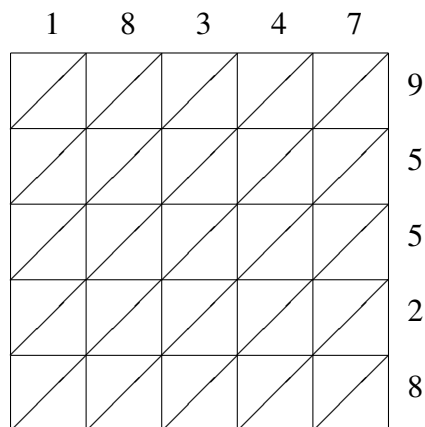
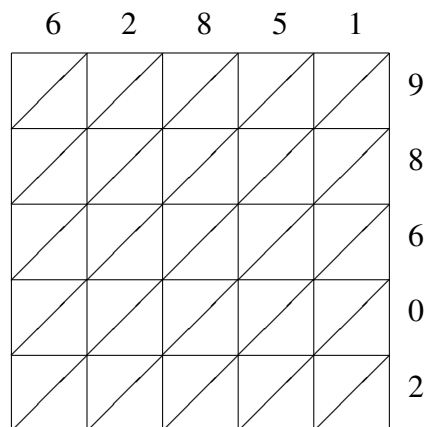


Lattice Multiplication (H)

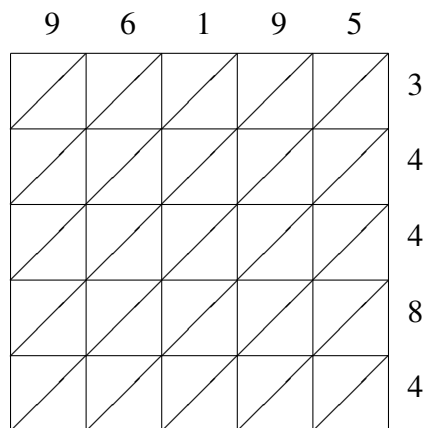
Use lattice multiplication to find each product.



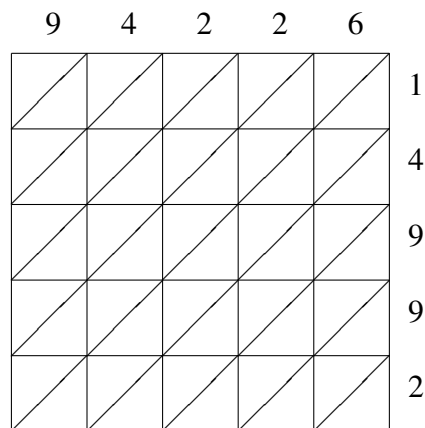
$$18347 \times 95528 = \underline{\hspace{2cm}}$$



$$62851 \times 98602 = \underline{\hspace{2cm}}$$



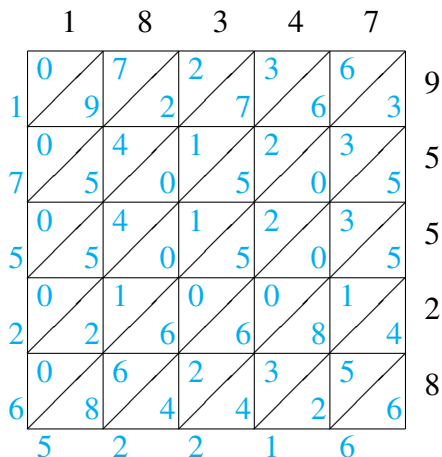
$$96195 \times 34484 = \underline{\hspace{2cm}}$$



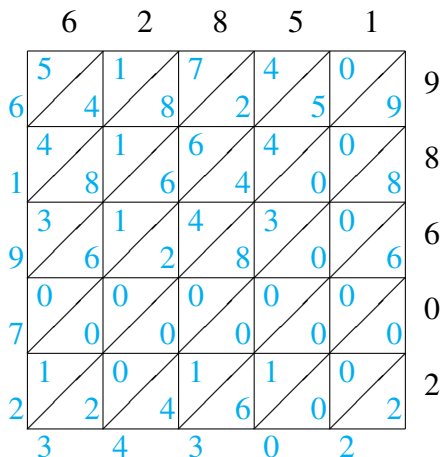
$$94226 \times 14992 = \underline{\hspace{2cm}}$$

Lattice Multiplication (H) Answers

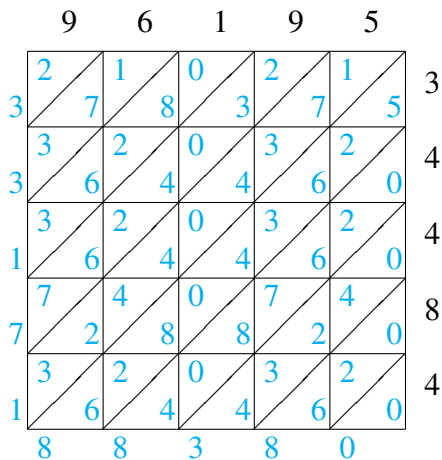
Use lattice multiplication to find each product.



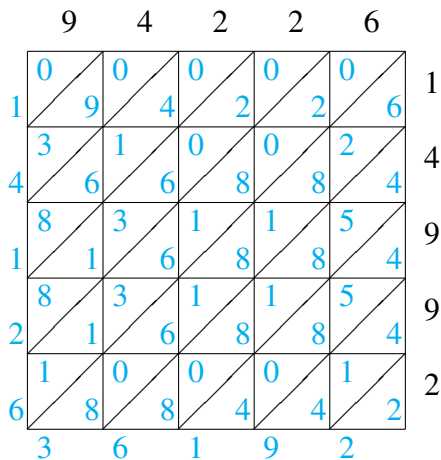
$$18347 \times 95528 = 1,752,652,216$$



$$62851 \times 98602 = 6,197,234,302$$



$$96195 \times 34484 = 3,317,188,380$$



$$94226 \times 14992 = 1,412,636,192$$