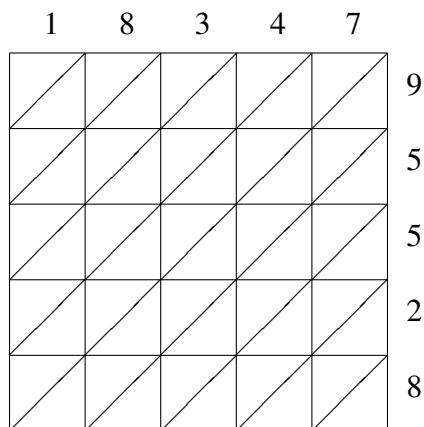
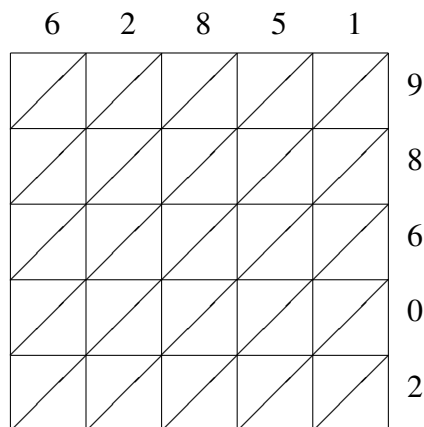


Lattice Multiplication (H)

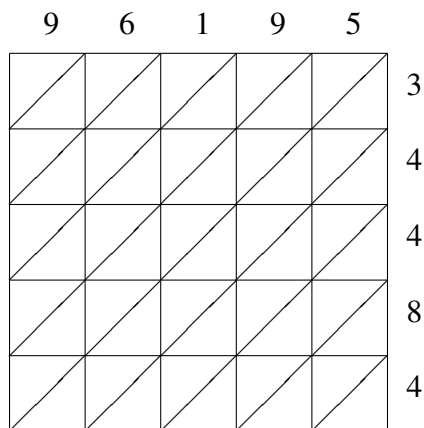
Use lattice multiplication to find each product.



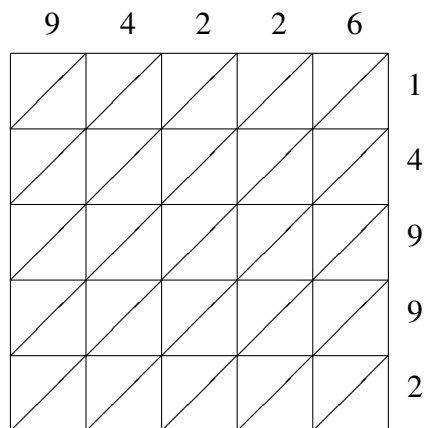
$$18347 \times 95528 = \underline{\hspace{2cm}}$$



$$62851 \times 98602 = \underline{\hspace{2cm}}$$



$$96195 \times 34484 = \underline{\hspace{2cm}}$$



$$94226 \times 14992 = \underline{\hspace{2cm}}$$