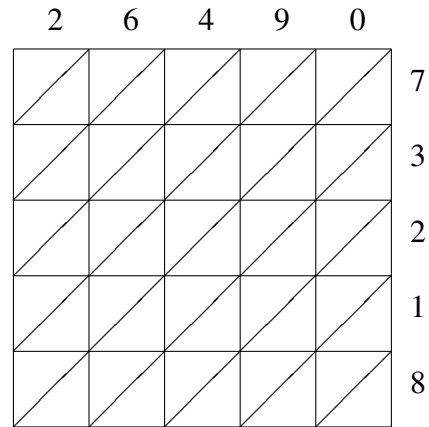
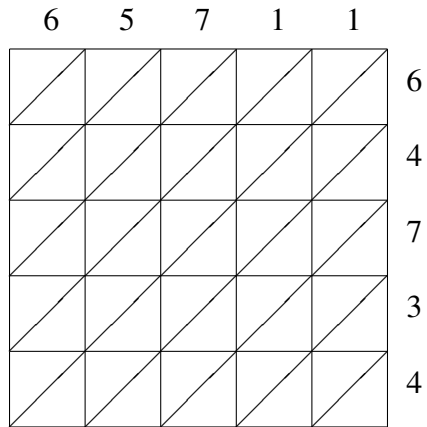


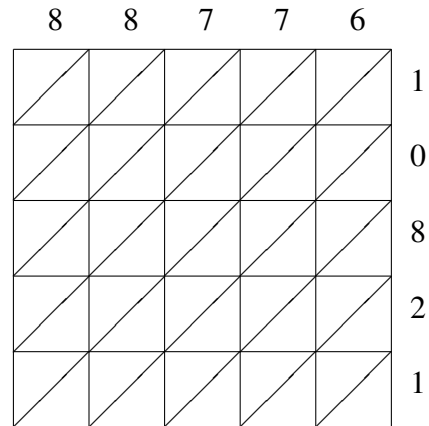
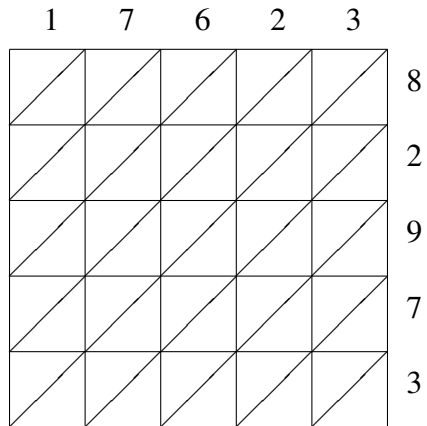
Lattice Multiplication (I)

Use lattice multiplication to find each product.



$65711 \times 64734 = \underline{\hspace{10em}}$

$26490 \times 73218 = \underline{\hspace{10em}}$



$17623 \times 82973 = \underline{\hspace{10em}}$

$88776 \times 10821 = \underline{\hspace{10em}}$