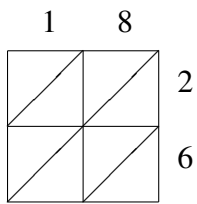
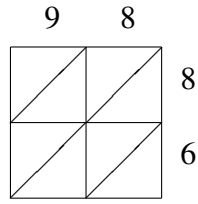


# Lattice Multiplication (A)

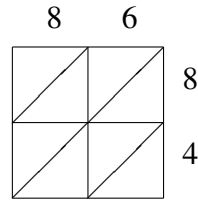
Use lattice multiplication to find each product.



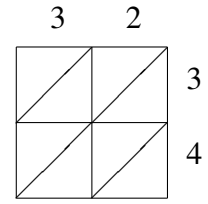
$18 \times 26 = \underline{\quad}$



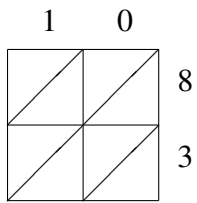
$98 \times 86 = \underline{\quad}$



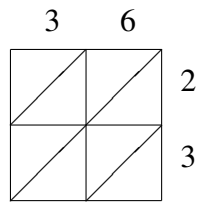
$86 \times 84 = \underline{\quad}$



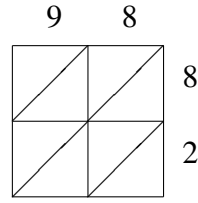
$32 \times 34 = \underline{\quad}$



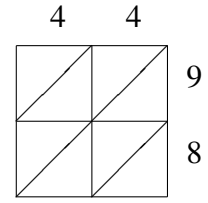
$10 \times 83 = \underline{\quad}$



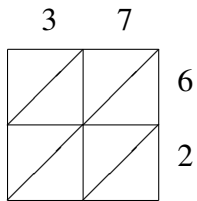
$36 \times 23 = \underline{\quad}$



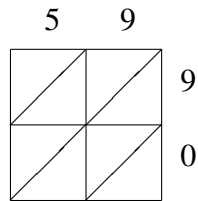
$98 \times 82 = \underline{\quad}$



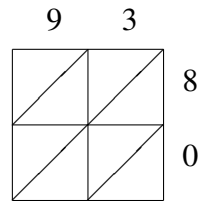
$44 \times 98 = \underline{\quad}$



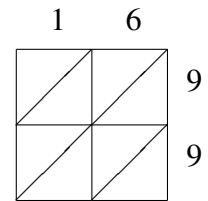
$37 \times 62 = \underline{\quad}$



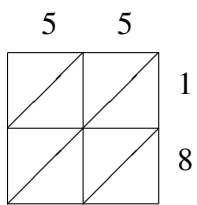
$59 \times 90 = \underline{\quad}$



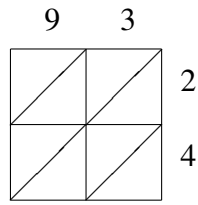
$93 \times 80 = \underline{\quad}$



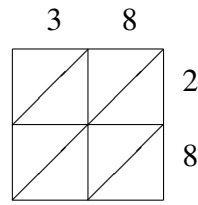
$16 \times 99 = \underline{\quad}$



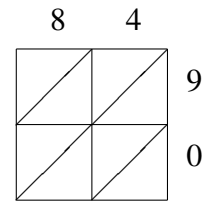
$55 \times 18 = \underline{\quad}$



$93 \times 24 = \underline{\quad}$



$38 \times 28 = \underline{\quad}$



$84 \times 90 = \underline{\quad}$