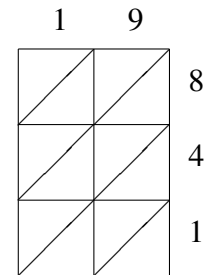
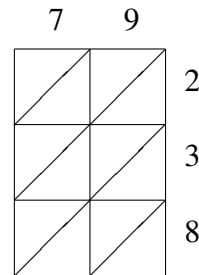
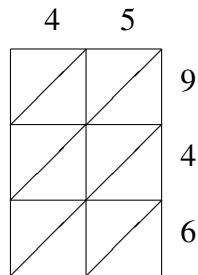
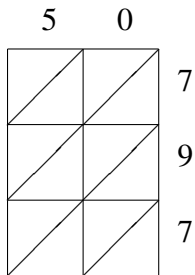
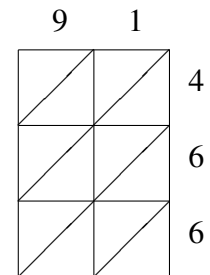
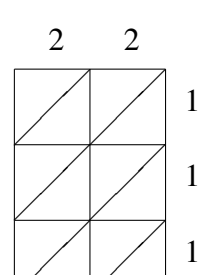
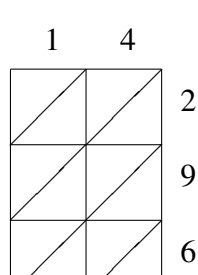
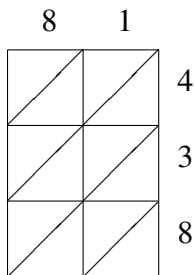


Lattice Multiplication (B)

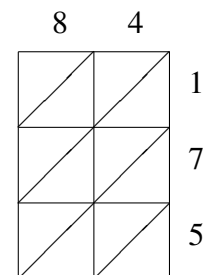
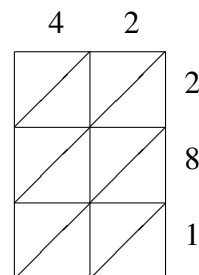
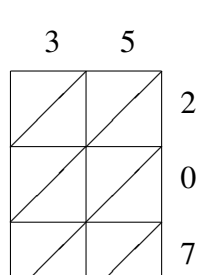
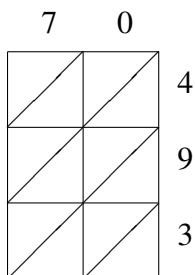
Use lattice multiplication to find each product.



$50 \times 797 =$ _____
 $45 \times 946 =$ _____
 $79 \times 238 =$ _____
 $19 \times 841 =$ _____



$81 \times 438 =$ _____
 $14 \times 296 =$ _____
 $22 \times 111 =$ _____
 $91 \times 466 =$ _____



$70 \times 493 =$ _____
 $35 \times 207 =$ _____
 $42 \times 281 =$ _____
 $84 \times 175 =$ _____