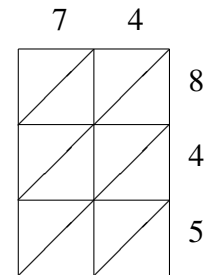
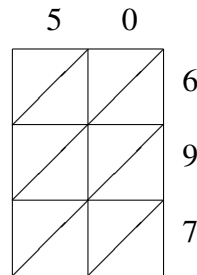
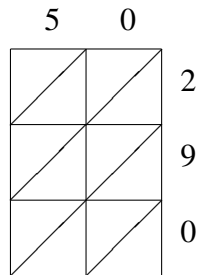
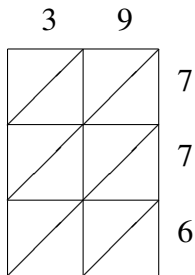
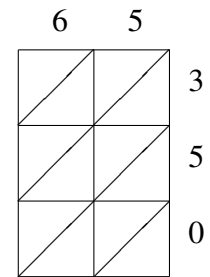
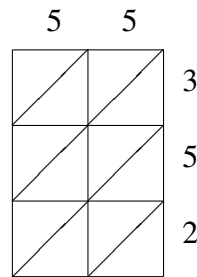
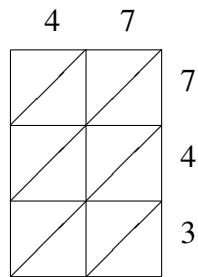
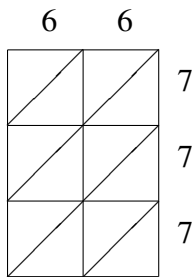


Lattice Multiplication (D)

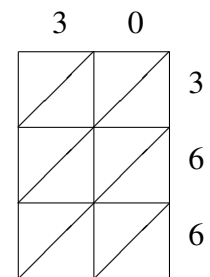
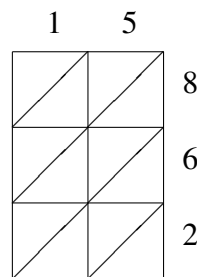
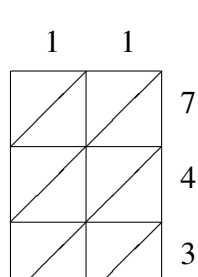
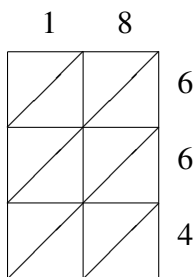
Use lattice multiplication to find each product.



$39 \times 776 =$
 $50 \times 290 =$
 $50 \times 697 =$
 $74 \times 845 =$



$66 \times 777 =$
 $47 \times 743 =$
 $55 \times 352 =$
 $65 \times 350 =$



$18 \times 664 =$
 $11 \times 743 =$

 $15 \times 862 =$
 $30 \times 366 =$

