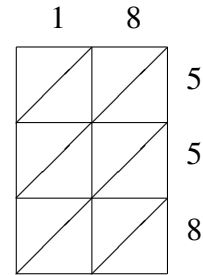
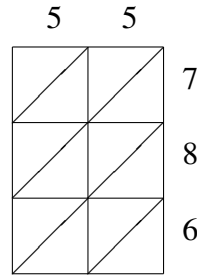
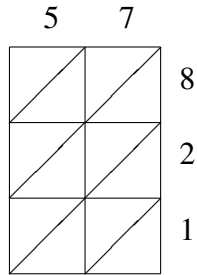
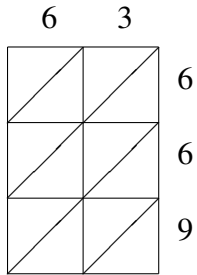
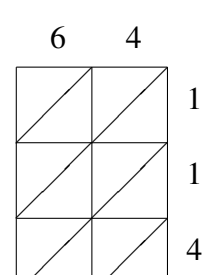
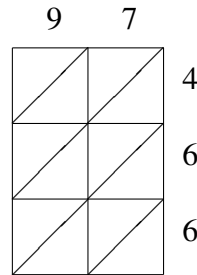
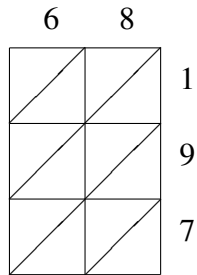
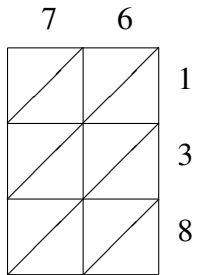


# Lattice Multiplication (E)

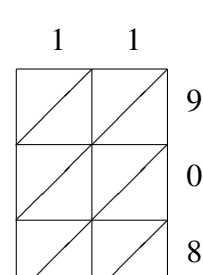
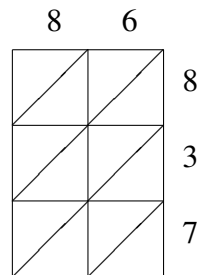
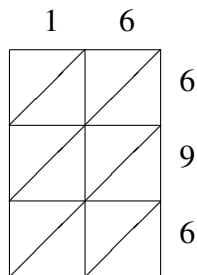
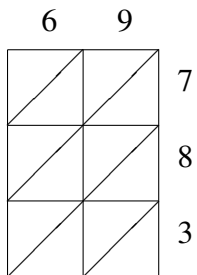
Use lattice multiplication to find each product.



$63 \times 669 =$ 
 $57 \times 821 =$ 
 $55 \times 786 =$ 
 $18 \times 558 =$ 
\_\_\_\_\_



$76 \times 138 =$ 
 $68 \times 197 =$ 
 $97 \times 466 =$ 
 $64 \times 114 =$ 
\_\_\_\_\_



$69 \times 783 =$ 
 $16 \times 696 =$ 
 $86 \times 837 =$ 
 $11 \times 908 =$ 
\_\_\_\_\_