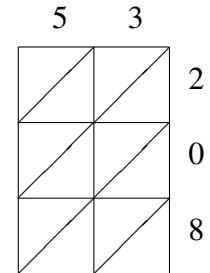
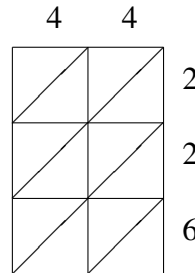
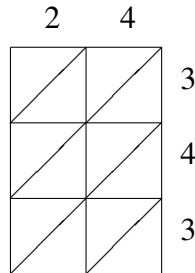
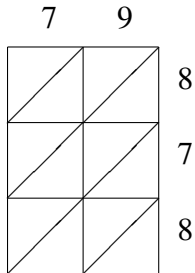
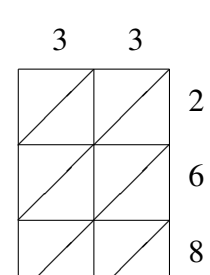
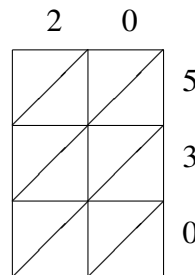
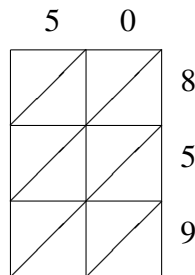
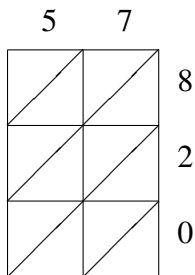


Lattice Multiplication (F)

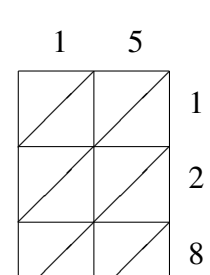
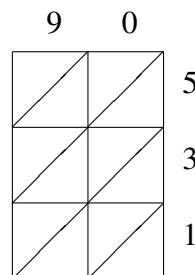
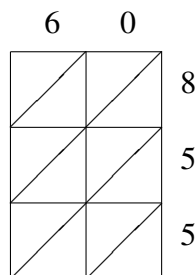
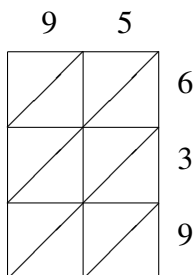
Use lattice multiplication to find each product.



$79 \times 878 =$
 $24 \times 343 =$ _____
 $44 \times 226 =$ _____
 $53 \times 208 =$ _____



$57 \times 820 =$ _____
 $50 \times 859 =$ _____
 $20 \times 530 =$ _____
 $33 \times 268 =$ _____



$95 \times 639 =$ _____
 $60 \times 855 =$ _____
 $90 \times 531 =$ _____
 $15 \times 128 =$ _____