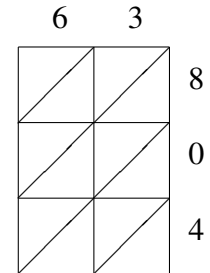
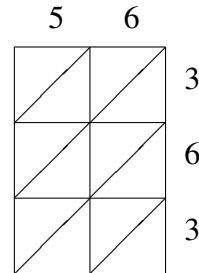
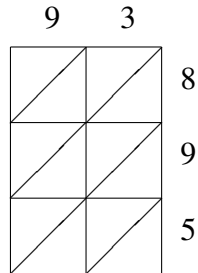
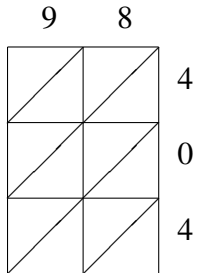
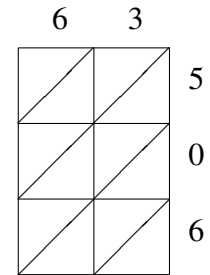
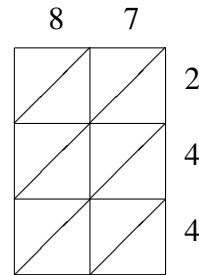
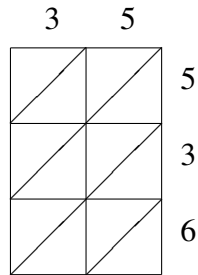
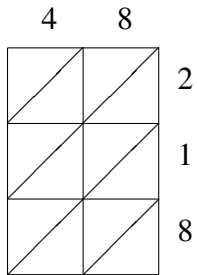


Lattice Multiplication (G)

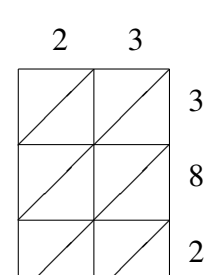
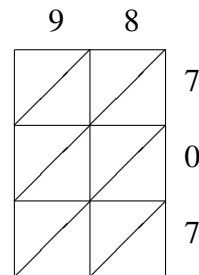
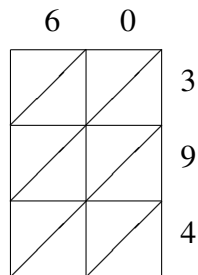
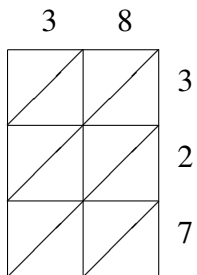
Use lattice multiplication to find each product.



$98 \times 404 =$
 $93 \times 895 =$
 $56 \times 363 =$
 $63 \times 804 =$



$48 \times 218 =$
 $35 \times 536 =$
 $87 \times 244 =$
 $63 \times 506 =$



$38 \times 327 =$
 $60 \times 394 =$
 $98 \times 707 =$
 $23 \times 382 =$
