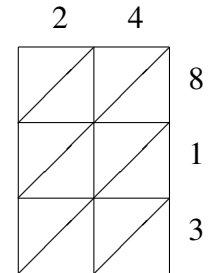
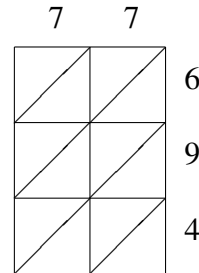
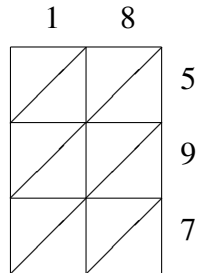
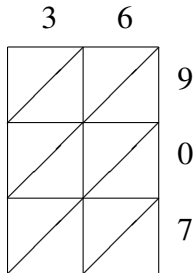
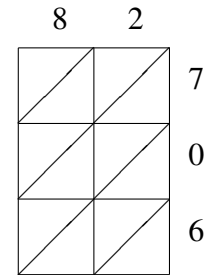
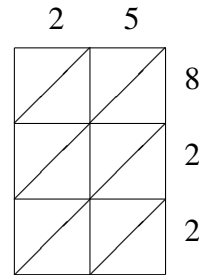
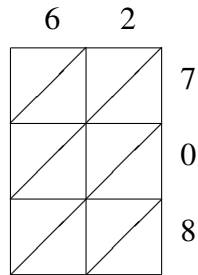
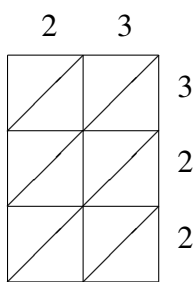


Lattice Multiplication (H)

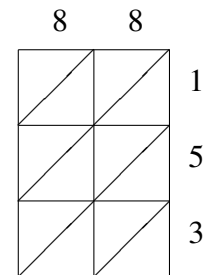
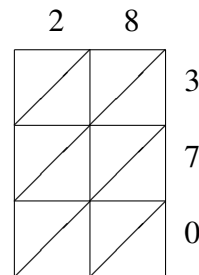
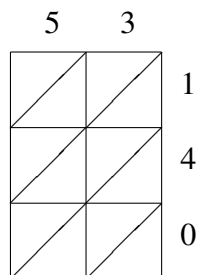
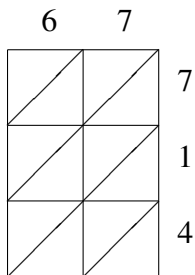
Use lattice multiplication to find each product.



$36 \times 907 =$ _____
 $18 \times 597 =$ _____
 $77 \times 694 =$ _____
 $24 \times 813 =$ _____



$23 \times 322 =$ _____
 $62 \times 708 =$ _____
 $25 \times 822 =$ _____
 $82 \times 706 =$ _____



$67 \times 714 =$ _____
 $53 \times 140 =$ _____
 $28 \times 370 =$ _____
 $88 \times 153 =$ _____