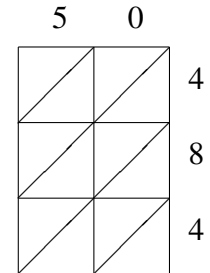
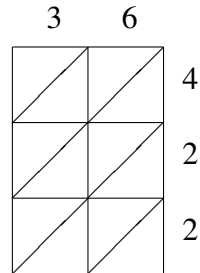
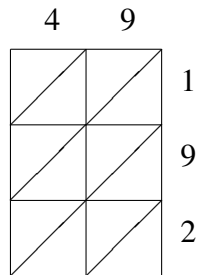
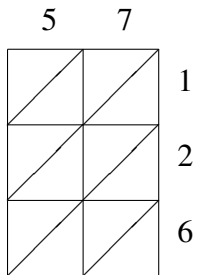
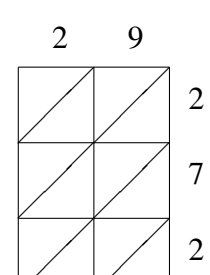
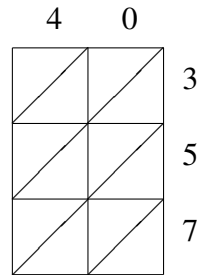
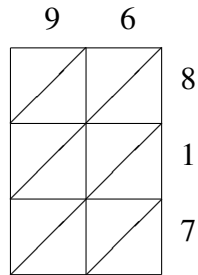
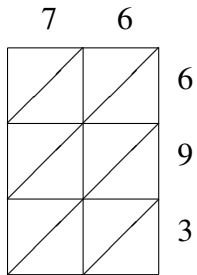


Lattice Multiplication (I)

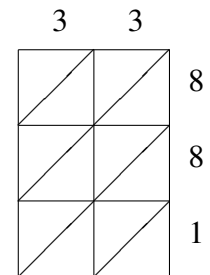
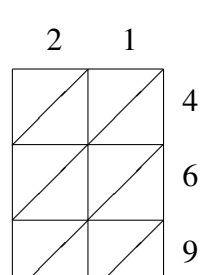
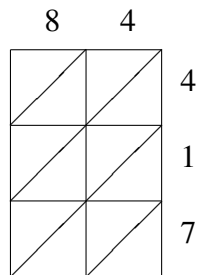
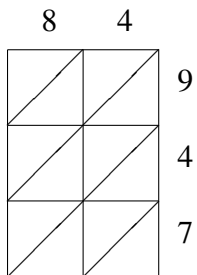
Use lattice multiplication to find each product.



$57 \times 126 = \underline{\hspace{2cm}}$
 $49 \times 192 = \underline{\hspace{2cm}}$
 $36 \times 422 = \underline{\hspace{2cm}}$
 $50 \times 484 = \underline{\hspace{2cm}}$



$76 \times 693 = \underline{\hspace{2cm}}$
 $96 \times 817 = \underline{\hspace{2cm}}$
 $40 \times 357 = \underline{\hspace{2cm}}$
 $29 \times 272 = \underline{\hspace{2cm}}$



$84 \times 947 = \underline{\hspace{2cm}}$
 $84 \times 417 = \underline{\hspace{2cm}}$
 $21 \times 469 = \underline{\hspace{2cm}}$
 $33 \times 881 = \underline{\hspace{2cm}}$