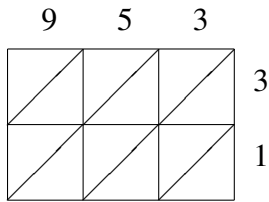
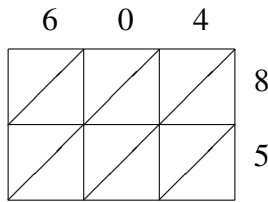


Lattice Multiplication (A)

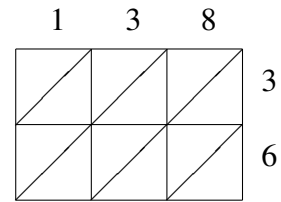
Use lattice multiplication to find each product.



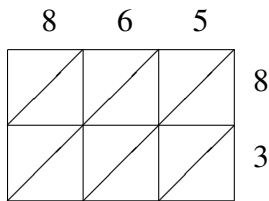
$953 \times 31 = \underline{\hspace{2cm}}$



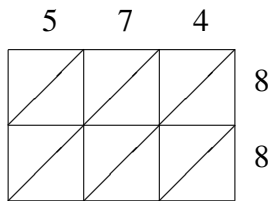
$604 \times 85 = \underline{\hspace{2cm}}$



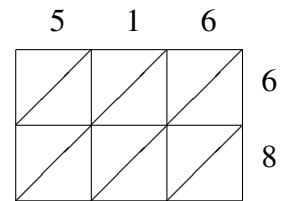
$138 \times 36 = \underline{\hspace{2cm}}$



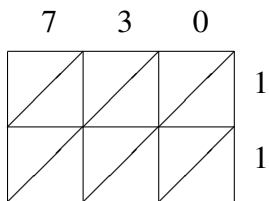
$865 \times 83 = \underline{\hspace{2cm}}$



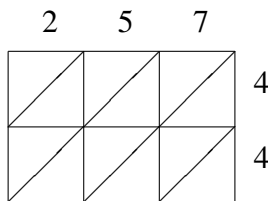
$574 \times 88 = \underline{\hspace{2cm}}$



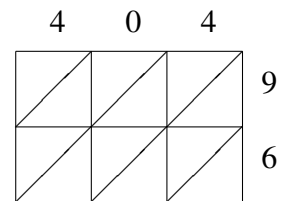
$516 \times 68 = \underline{\hspace{2cm}}$



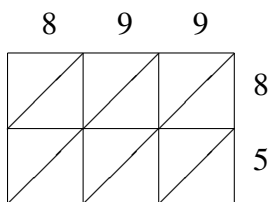
$730 \times 11 = \underline{\hspace{2cm}}$



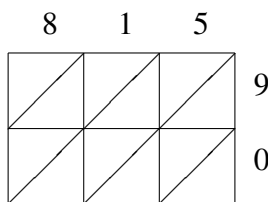
$257 \times 44 = \underline{\hspace{2cm}}$



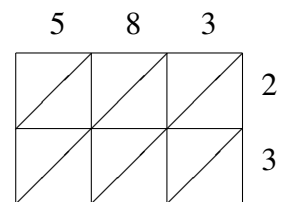
$404 \times 96 = \underline{\hspace{2cm}}$



$899 \times 85 = \underline{\hspace{2cm}}$



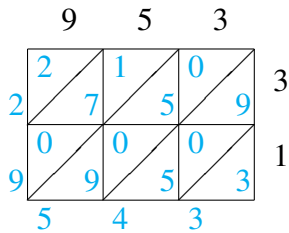
$815 \times 90 = \underline{\hspace{2cm}}$



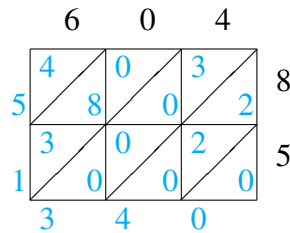
$583 \times 23 = \underline{\hspace{2cm}}$

Lattice Multiplication (A) Answers

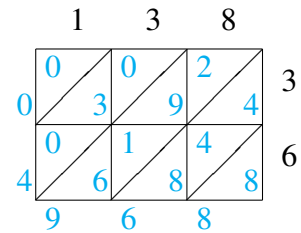
Use lattice multiplication to find each product.



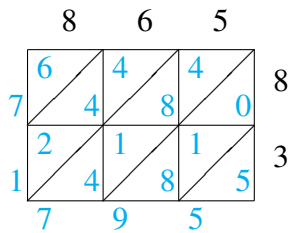
$$953 \times 31 = 29,543$$



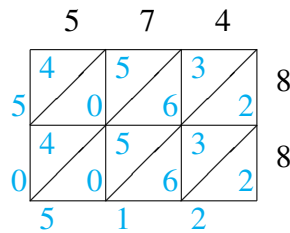
$$604 \times 85 = 51,340$$



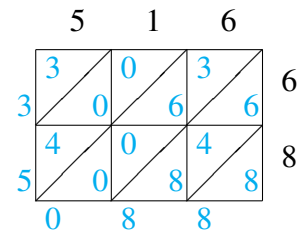
$$138 \times 36 = 4,968$$



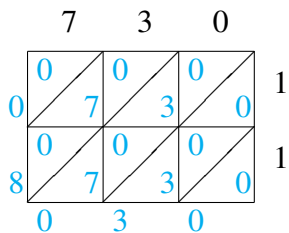
$$865 \times 83 = 71,795$$



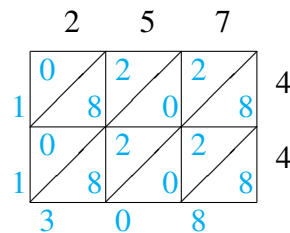
$$574 \times 88 = 50,512$$



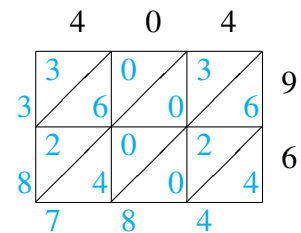
$$516 \times 68 = 35,088$$



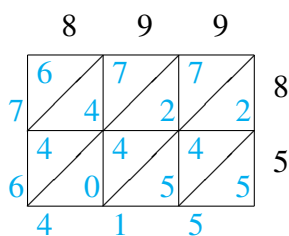
$$730 \times 11 = 8,030$$



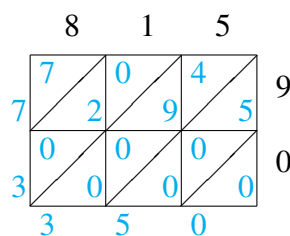
$$257 \times 44 = 11,308$$



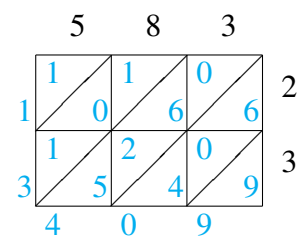
$$404 \times 96 = 38,784$$



$$899 \times 85 = 76,415$$



$$815 \times 90 = 73,350$$



$$583 \times 23 = 13,409$$