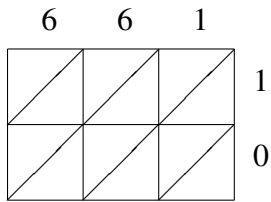
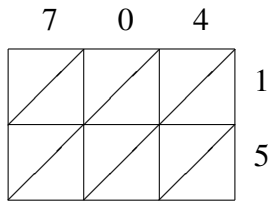


# Lattice Multiplication (D)

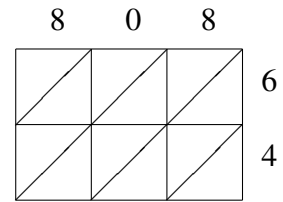
Use lattice multiplication to find each product.



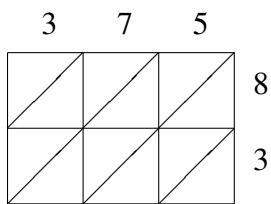
$661 \times 10 = \underline{\hspace{2cm}}$



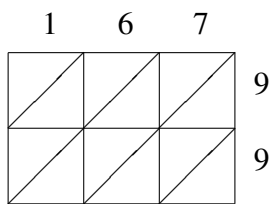
$704 \times 15 = \underline{\hspace{2cm}}$



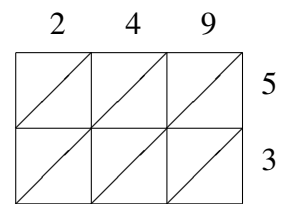
$808 \times 64 = \underline{\hspace{2cm}}$



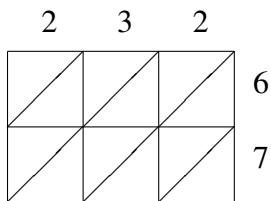
$375 \times 83 = \underline{\hspace{2cm}}$



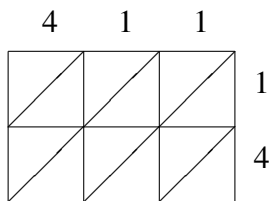
$167 \times 99 = \underline{\hspace{2cm}}$



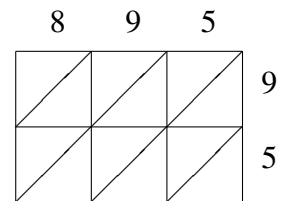
$249 \times 53 = \underline{\hspace{2cm}}$



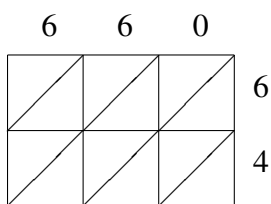
$232 \times 67 = \underline{\hspace{2cm}}$



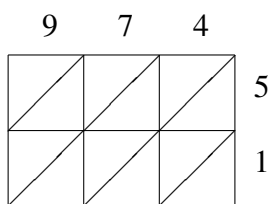
$411 \times 14 = \underline{\hspace{2cm}}$



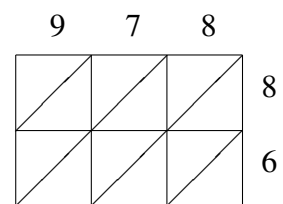
$895 \times 95 = \underline{\hspace{2cm}}$



$660 \times 64 = \underline{\hspace{2cm}}$



$974 \times 51 = \underline{\hspace{2cm}}$



$978 \times 86 = \underline{\hspace{2cm}}$