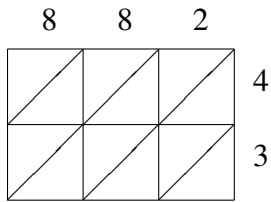
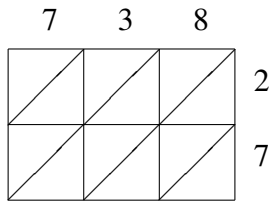


Lattice Multiplication (F)

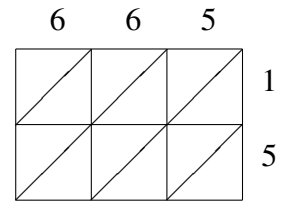
Use lattice multiplication to find each product.



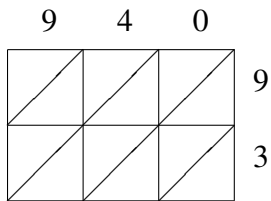
$882 \times 43 = \underline{\hspace{2cm}}$



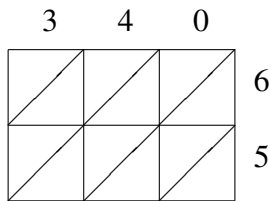
$738 \times 27 = \underline{\hspace{2cm}}$



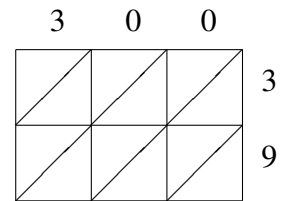
$665 \times 15 = \underline{\hspace{2cm}}$



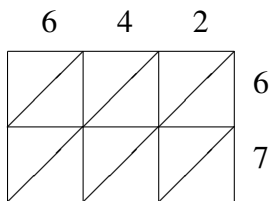
$940 \times 93 = \underline{\hspace{2cm}}$



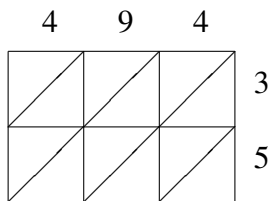
$340 \times 65 = \underline{\hspace{2cm}}$



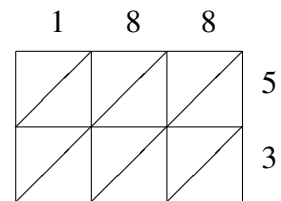
$300 \times 39 = \underline{\hspace{2cm}}$



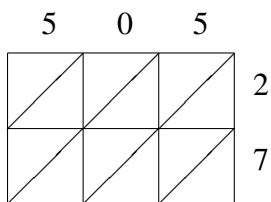
$642 \times 67 = \underline{\hspace{2cm}}$



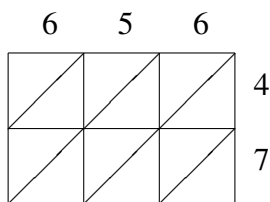
$494 \times 35 = \underline{\hspace{2cm}}$



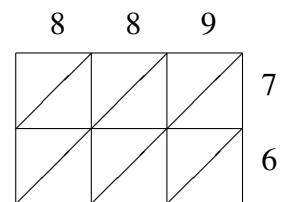
$188 \times 53 = \underline{\hspace{2cm}}$



$505 \times 27 = \underline{\hspace{2cm}}$



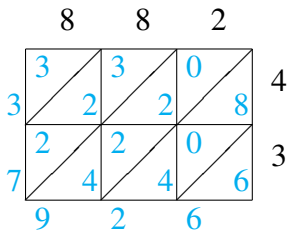
$656 \times 47 = \underline{\hspace{2cm}}$



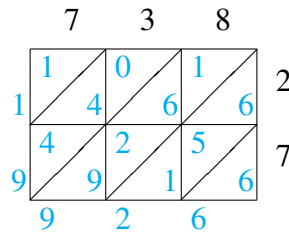
$889 \times 76 = \underline{\hspace{2cm}}$

Lattice Multiplication (F) Answers

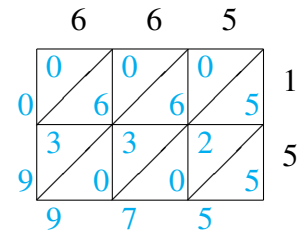
Use lattice multiplication to find each product.



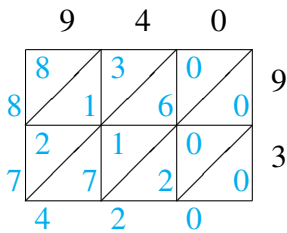
$$882 \times 43 = 37,926$$



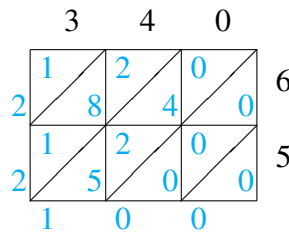
$$738 \times 27 = 19,926$$



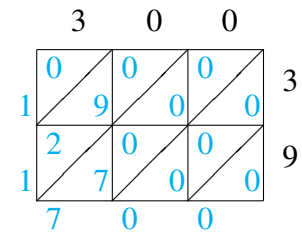
$$665 \times 15 = 9,975$$



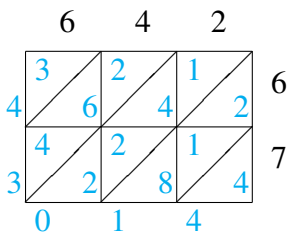
$$940 \times 93 = 87,420$$



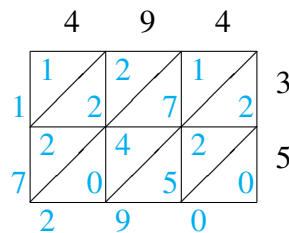
$$340 \times 65 = 22,100$$



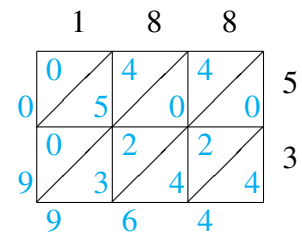
$$300 \times 39 = 11,700$$



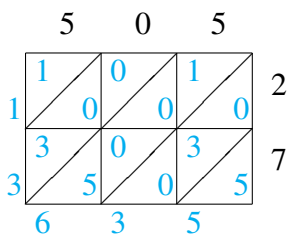
$$642 \times 67 = 43,014$$



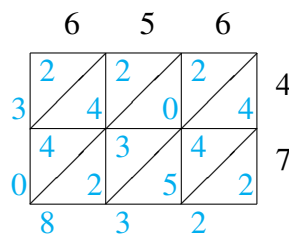
$$494 \times 35 = 17,290$$



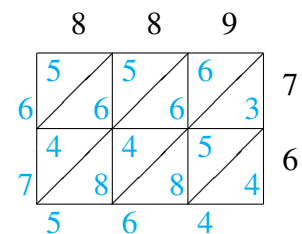
$$188 \times 53 = 9,964$$



$$505 \times 27 = 13,635$$



$$656 \times 47 = 30,832$$



$$889 \times 76 = 67,564$$