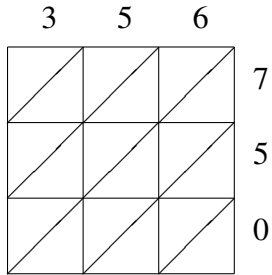
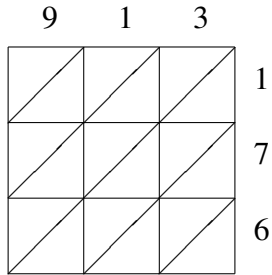


Lattice Multiplication (F)

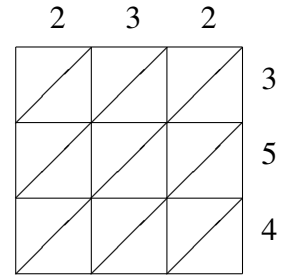
Use lattice multiplication to find each product.



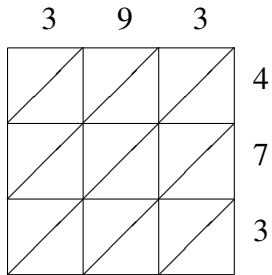
$356 \times 750 = \underline{\hspace{2cm}}$



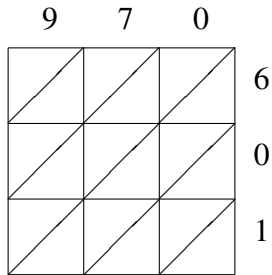
$913 \times 176 = \underline{\hspace{2cm}}$



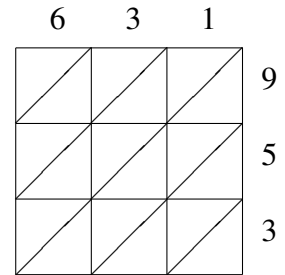
$232 \times 354 = \underline{\hspace{2cm}}$



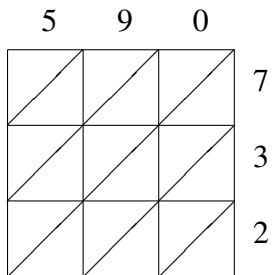
$393 \times 473 = \underline{\hspace{2cm}}$



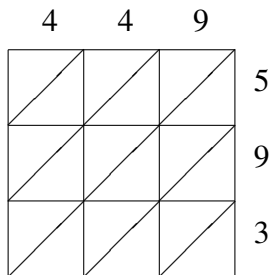
$970 \times 601 = \underline{\hspace{2cm}}$



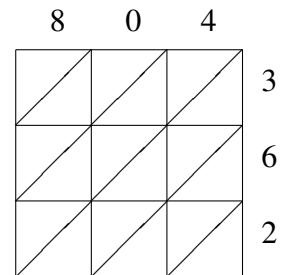
$631 \times 953 = \underline{\hspace{2cm}}$



$590 \times 732 = \underline{\hspace{2cm}}$



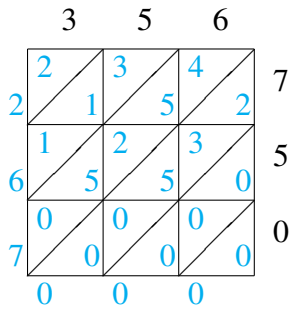
$449 \times 593 = \underline{\hspace{2cm}}$



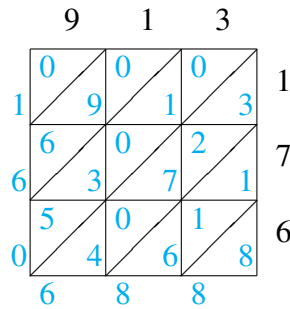
$804 \times 362 = \underline{\hspace{2cm}}$

Lattice Multiplication (F) Answers

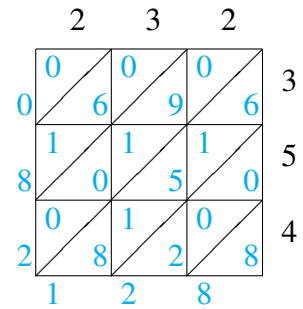
Use lattice multiplication to find each product.



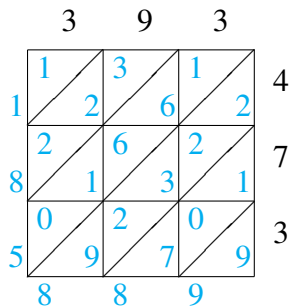
$$356 \times 750 = 267,000$$



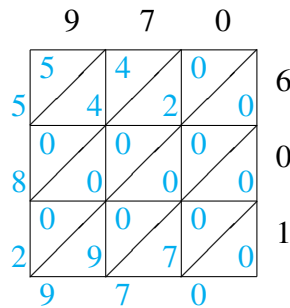
$$913 \times 176 = 160,688$$



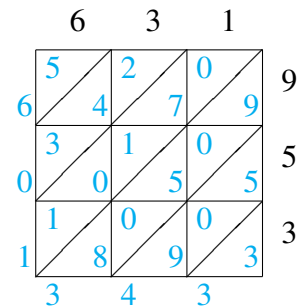
$$232 \times 354 = 82,128$$



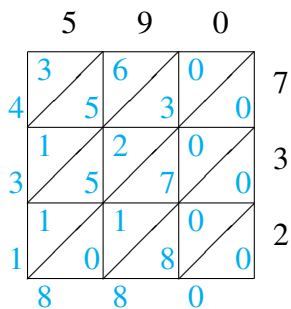
$$393 \times 473 = 185,889$$



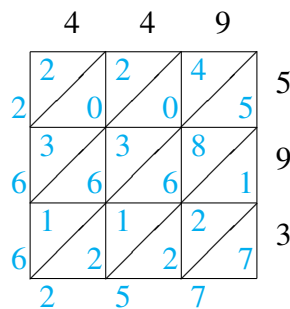
$$970 \times 601 = 582,970$$



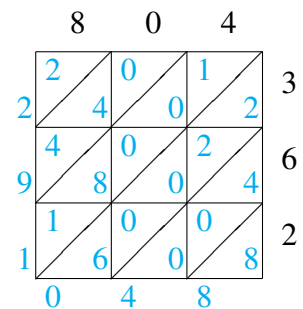
$$631 \times 953 = 601,343$$



$$590 \times 732 = 431,880$$



$$449 \times 593 = 266,257$$



$$804 \times 362 = 291,048$$