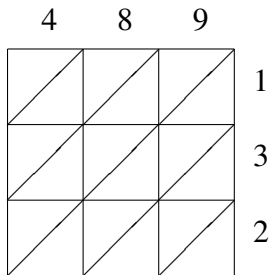
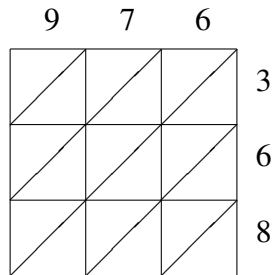


Lattice Multiplication (G)

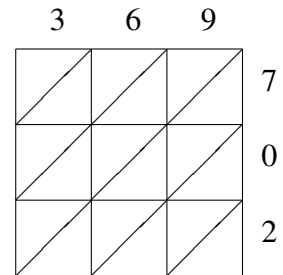
Use lattice multiplication to find each product.



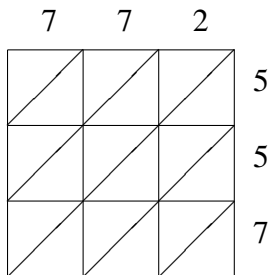
$489 \times 132 = \underline{\hspace{2cm}}$



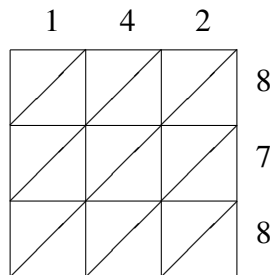
$976 \times 368 = \underline{\hspace{2cm}}$



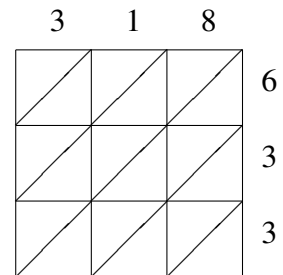
$369 \times 702 = \underline{\hspace{2cm}}$



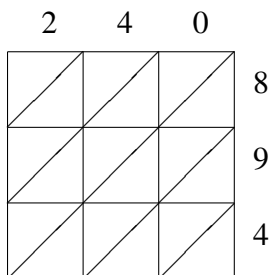
$772 \times 557 = \underline{\hspace{2cm}}$



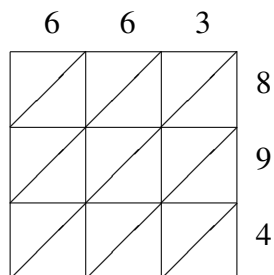
$142 \times 878 = \underline{\hspace{2cm}}$



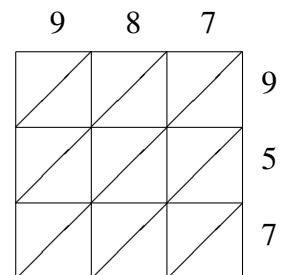
$318 \times 633 = \underline{\hspace{2cm}}$



$240 \times 894 = \underline{\hspace{2cm}}$



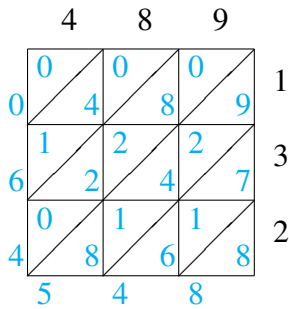
$663 \times 894 = \underline{\hspace{2cm}}$



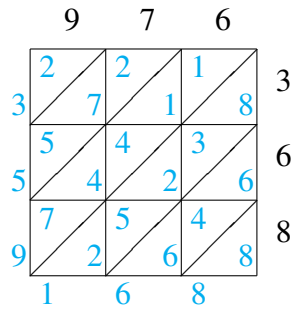
$987 \times 957 = \underline{\hspace{2cm}}$

Lattice Multiplication (G) Answers

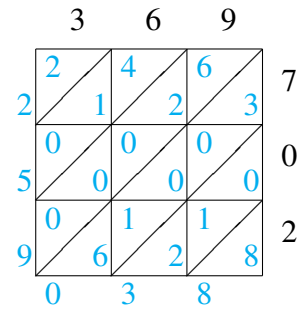
Use lattice multiplication to find each product.



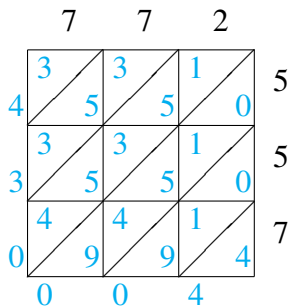
$$489 \times 132 = 64,548$$



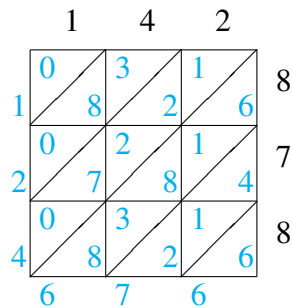
$$976 \times 368 = 359,168$$



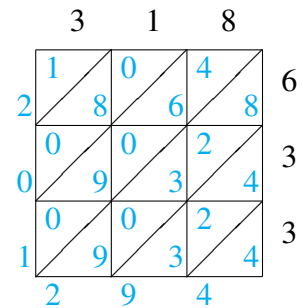
$$369 \times 702 = 259,038$$



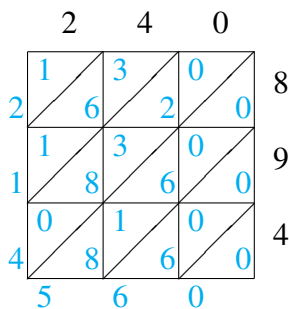
$$772 \times 557 = 430,004$$



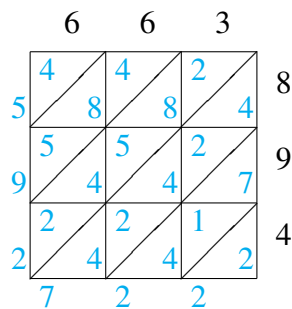
$$142 \times 878 = 124,676$$



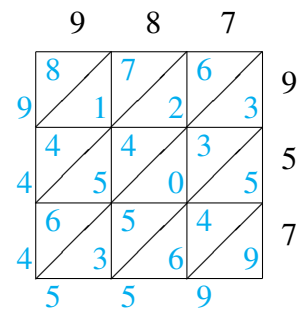
$$318 \times 633 = 201,294$$



$$240 \times 894 = 214,560$$



$$663 \times 894 = 592,722$$



$$987 \times 957 = 944,559$$