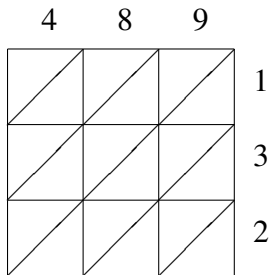
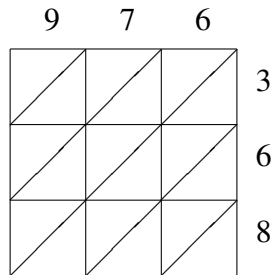


Lattice Multiplication (G)

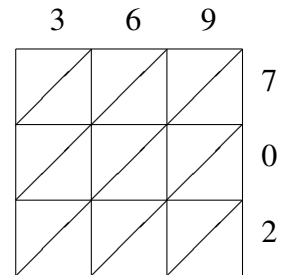
Use lattice multiplication to find each product.



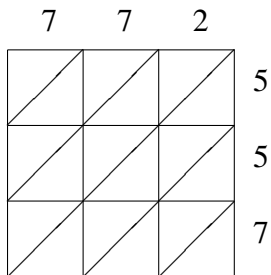
$489 \times 132 = \underline{\hspace{2cm}}$



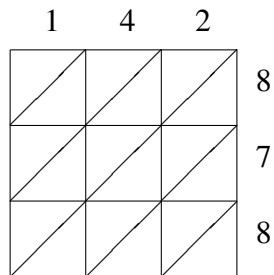
$976 \times 368 = \underline{\hspace{2cm}}$



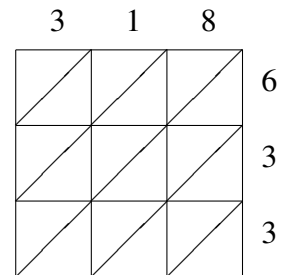
$369 \times 702 = \underline{\hspace{2cm}}$



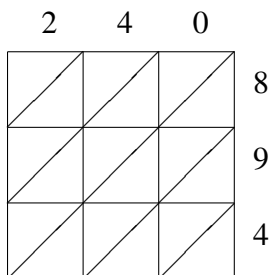
$772 \times 557 = \underline{\hspace{2cm}}$



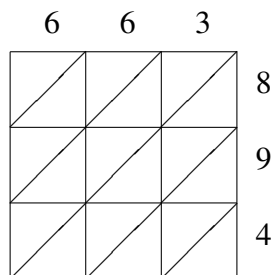
$142 \times 878 = \underline{\hspace{2cm}}$



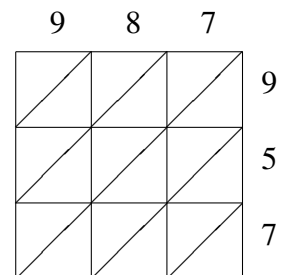
$318 \times 633 = \underline{\hspace{2cm}}$



$240 \times 894 = \underline{\hspace{2cm}}$



$663 \times 894 = \underline{\hspace{2cm}}$



$987 \times 957 = \underline{\hspace{2cm}}$