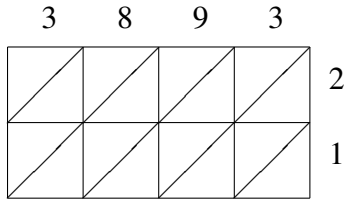
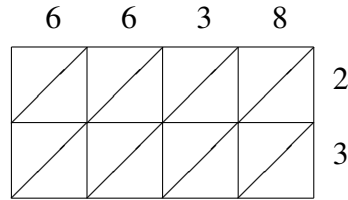


Lattice Multiplication (A)

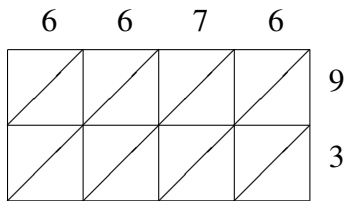
Use lattice multiplication to find each product.



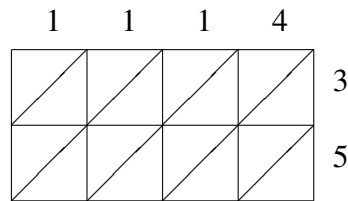
$3893 \times 21 = \underline{\hspace{2cm}}$



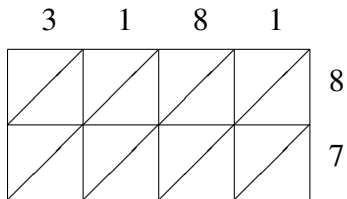
$6638 \times 23 = \underline{\hspace{2cm}}$



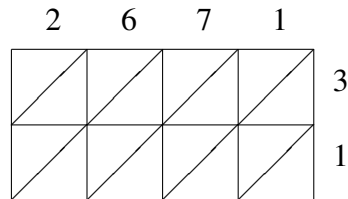
$6676 \times 93 = \underline{\hspace{2cm}}$



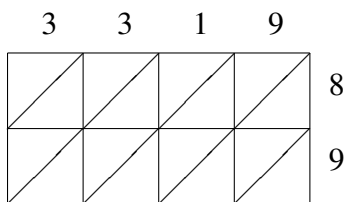
$1114 \times 35 = \underline{\hspace{2cm}}$



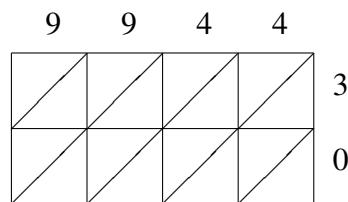
$3181 \times 87 = \underline{\hspace{2cm}}$



$2671 \times 31 = \underline{\hspace{2cm}}$



$3319 \times 89 = \underline{\hspace{2cm}}$



$9944 \times 30 = \underline{\hspace{2cm}}$

