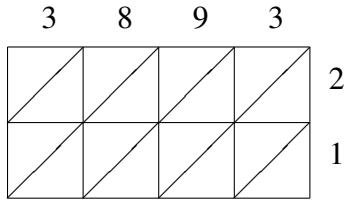
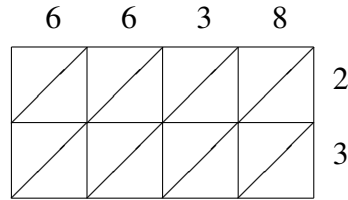


Lattice Multiplication (A)

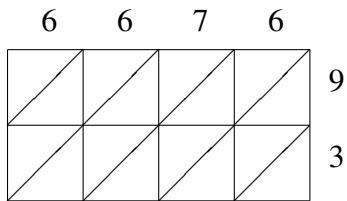
Use lattice multiplication to find each product.



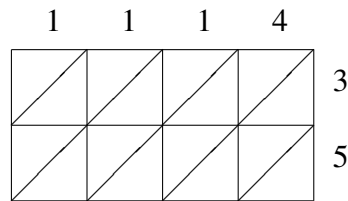
$$3893 \times 21 = \underline{\hspace{2cm}}$$



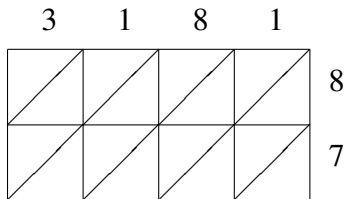
$$6638 \times 23 = \underline{\hspace{2cm}}$$



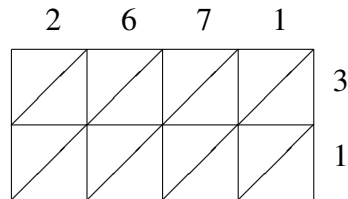
$$6676 \times 93 = \underline{\hspace{2cm}}$$



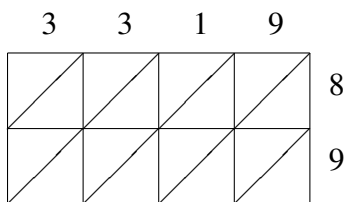
$$1114 \times 35 = \underline{\hspace{2cm}}$$



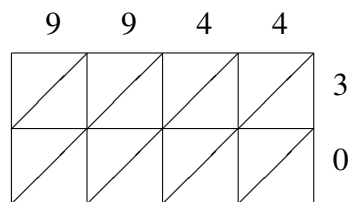
$$3181 \times 87 = \underline{\hspace{2cm}}$$



$$2671 \times 31 = \underline{\hspace{2cm}}$$



$$3319 \times 89 = \underline{\hspace{2cm}}$$



$$9944 \times 30 = \underline{\hspace{2cm}}$$