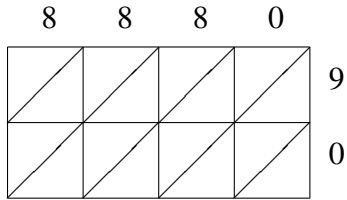
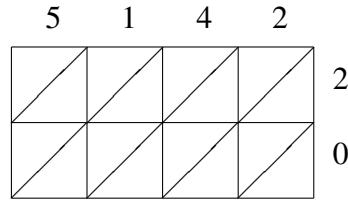


Lattice Multiplication (D)

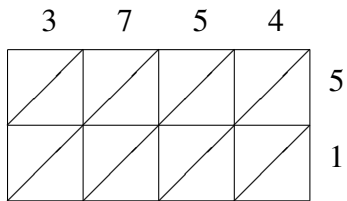
Use lattice multiplication to find each product.



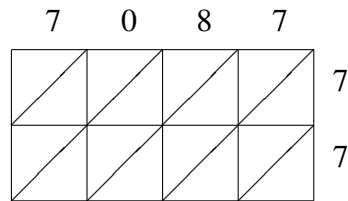
$8880 \times 90 = \underline{\hspace{2cm}}$



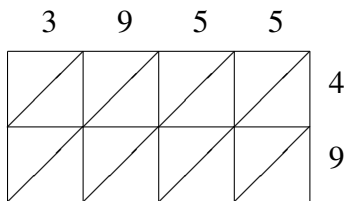
$5142 \times 20 = \underline{\hspace{2cm}}$



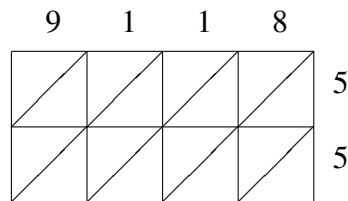
$3754 \times 51 = \underline{\hspace{2cm}}$



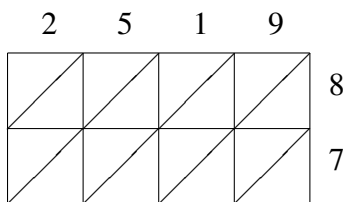
$7087 \times 77 = \underline{\hspace{2cm}}$



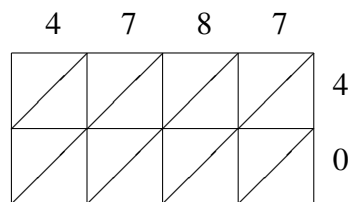
$3955 \times 49 = \underline{\hspace{2cm}}$



$9118 \times 55 = \underline{\hspace{2cm}}$



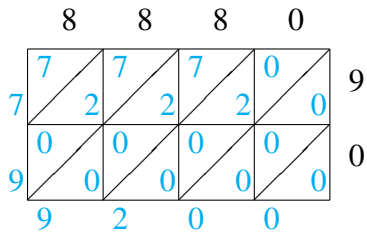
$2519 \times 87 = \underline{\hspace{2cm}}$



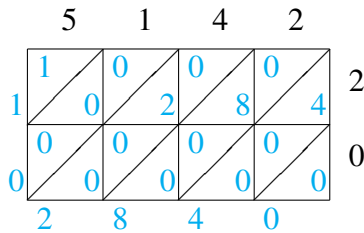
$4787 \times 40 = \underline{\hspace{2cm}}$

Lattice Multiplication (D) Answers

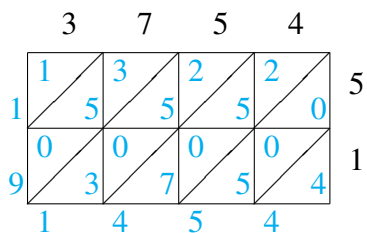
Use lattice multiplication to find each product.



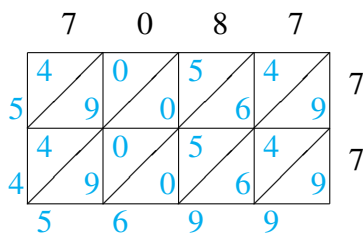
$$8880 \times 90 = 799,200$$



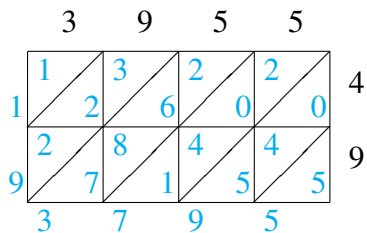
$$5142 \times 20 = 102,840$$



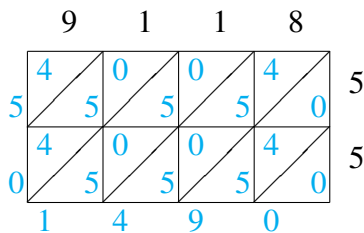
$$3754 \times 51 = 191,454$$



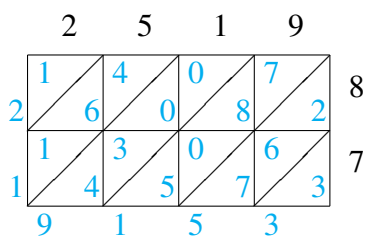
$$7087 \times 77 = 545,699$$



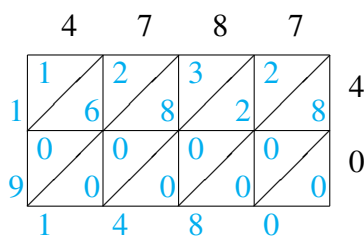
$$3955 \times 49 = 193,795$$



$$9118 \times 55 = 501,490$$



$$2519 \times 87 = 219,153$$



$$4787 \times 40 = 191,480$$