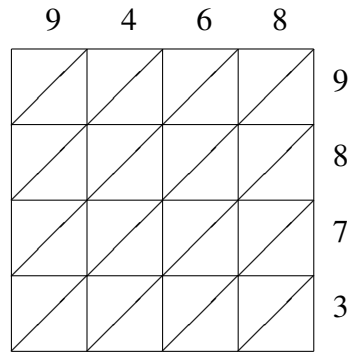
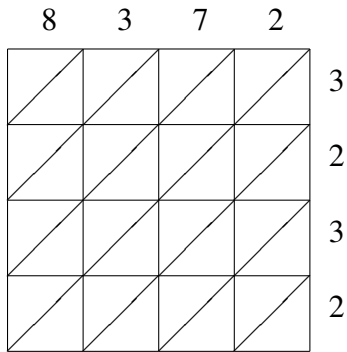


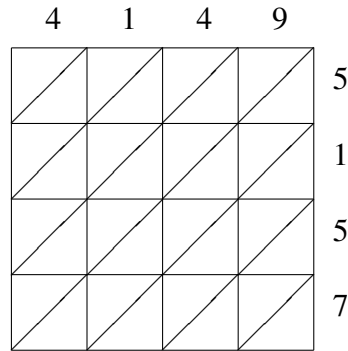
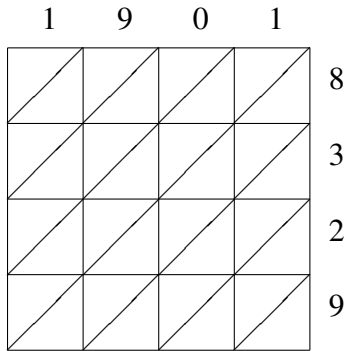
# Lattice Multiplication (A)

Use lattice multiplication to find each product.



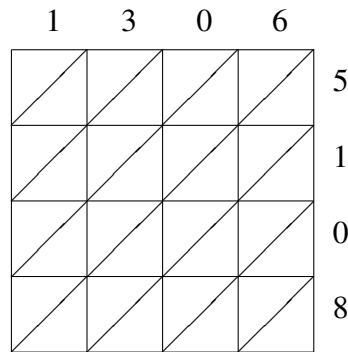
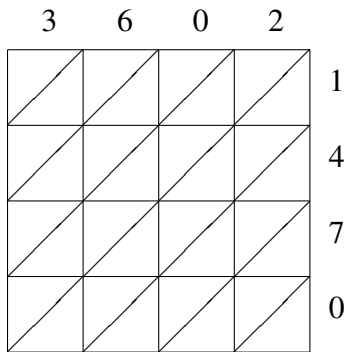
$8372 \times 3232 = \underline{\hspace{2cm}}$

$9468 \times 9873 = \underline{\hspace{2cm}}$



$1901 \times 8329 = \underline{\hspace{2cm}}$

$4149 \times 5157 = \underline{\hspace{2cm}}$



$3602 \times 1470 = \underline{\hspace{2cm}}$

$1306 \times 5108 = \underline{\hspace{2cm}}$