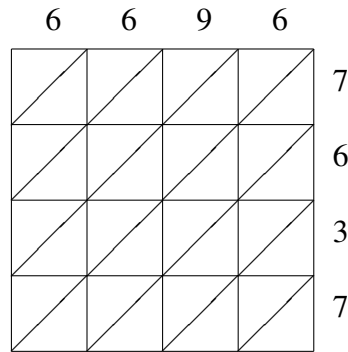
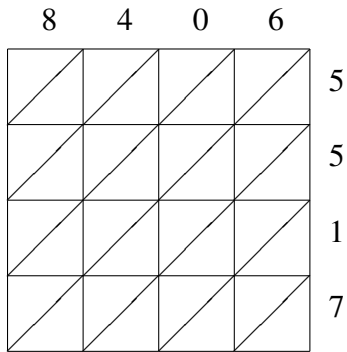


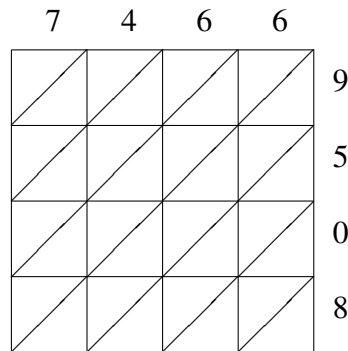
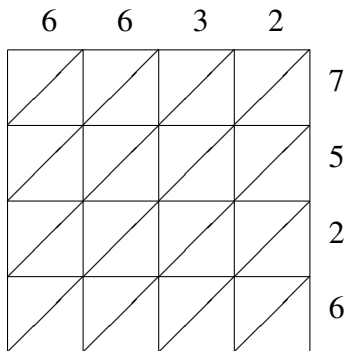
Lattice Multiplication (B)

Use lattice multiplication to find each product.



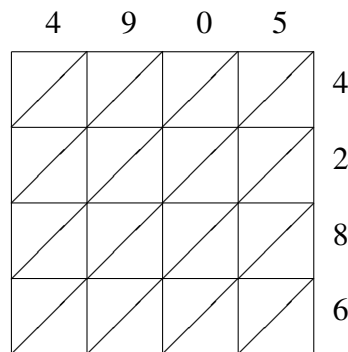
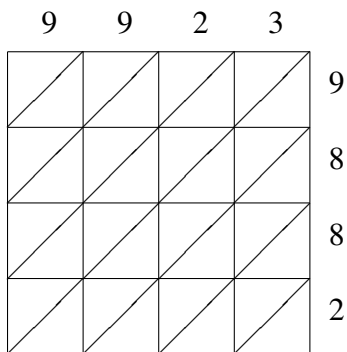
$8406 \times 5517 = \underline{\hspace{2cm}}$

$6696 \times 7637 = \underline{\hspace{2cm}}$



$6632 \times 7526 = \underline{\hspace{2cm}}$

$7466 \times 9508 = \underline{\hspace{2cm}}$



$9923 \times 9882 = \underline{\hspace{2cm}}$

$4905 \times 4286 = \underline{\hspace{2cm}}$