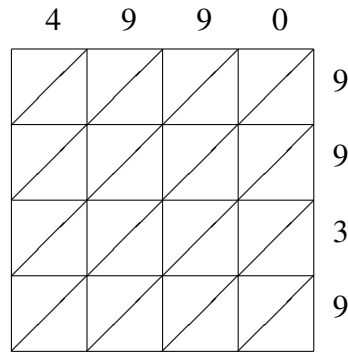
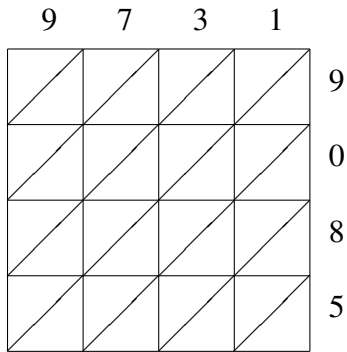


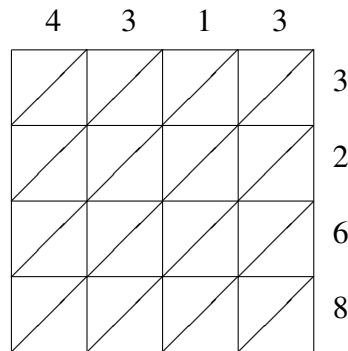
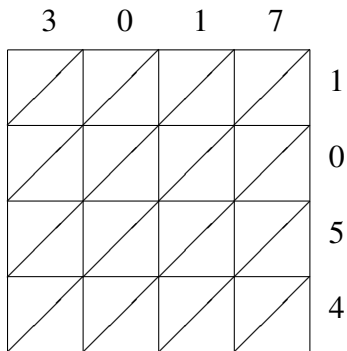
# Lattice Multiplication (F)

Use lattice multiplication to find each product.



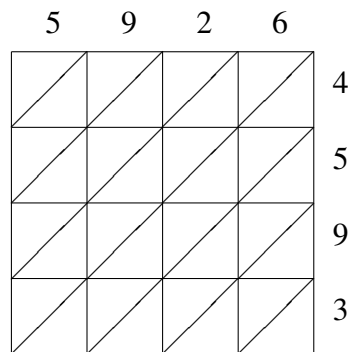
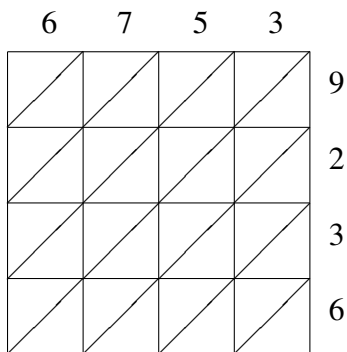
$9731 \times 9085 = \underline{\hspace{2cm}}$

$4990 \times 9939 = \underline{\hspace{2cm}}$



$3017 \times 1054 = \underline{\hspace{2cm}}$

$4313 \times 3268 = \underline{\hspace{2cm}}$



$6753 \times 9236 = \underline{\hspace{2cm}}$

$5926 \times 4593 = \underline{\hspace{2cm}}$