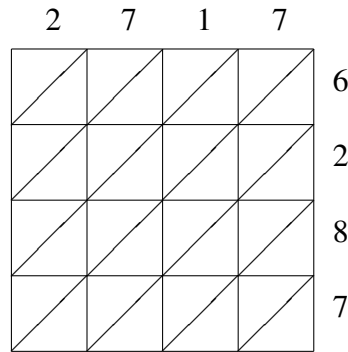
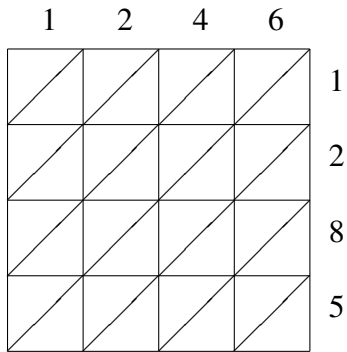


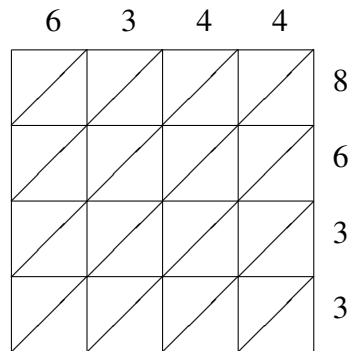
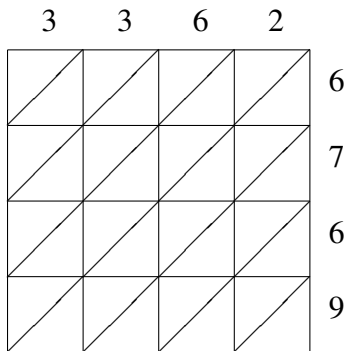
# Lattice Multiplication (G)

Use lattice multiplication to find each product.



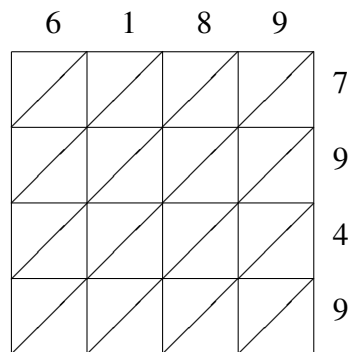
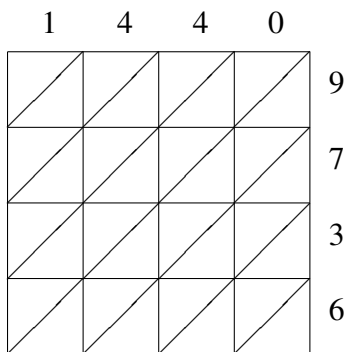
$1246 \times 1285 = \underline{\hspace{2cm}}$

$2717 \times 6287 = \underline{\hspace{2cm}}$



$3362 \times 6769 = \underline{\hspace{2cm}}$

$6344 \times 8633 = \underline{\hspace{2cm}}$



$1440 \times 9736 = \underline{\hspace{2cm}}$

$6189 \times 7949 = \underline{\hspace{2cm}}$