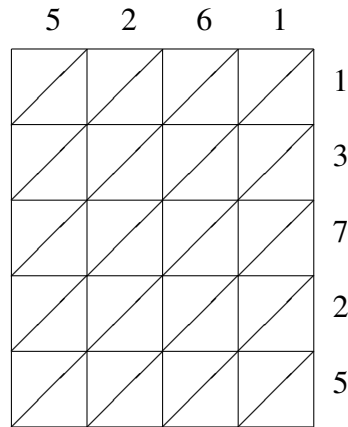
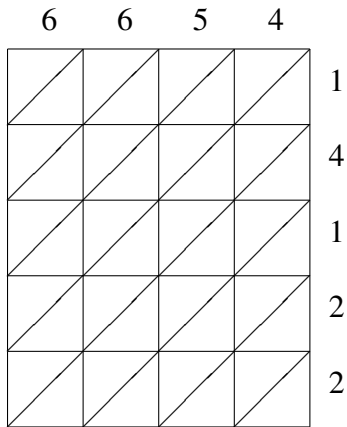


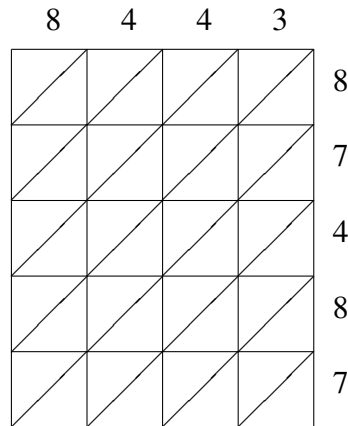
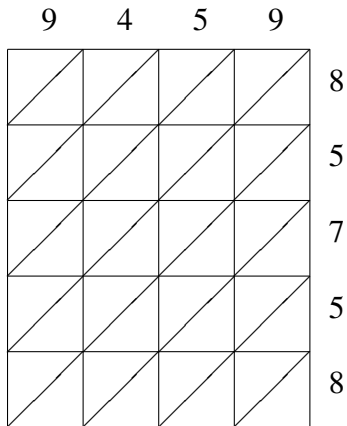
Lattice Multiplication (A)

Use lattice multiplication to find each product.



$6654 \times 14122 = \underline{\hspace{2cm}}$

$5261 \times 13725 = \underline{\hspace{2cm}}$



$9459 \times 85758 = \underline{\hspace{2cm}}$

$8443 \times 87487 = \underline{\hspace{2cm}}$