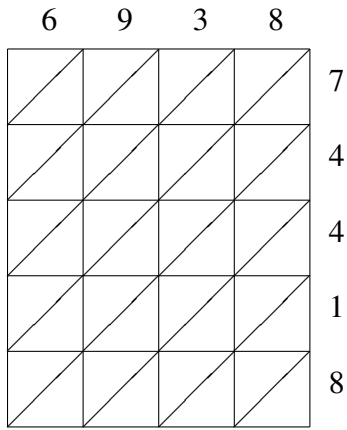
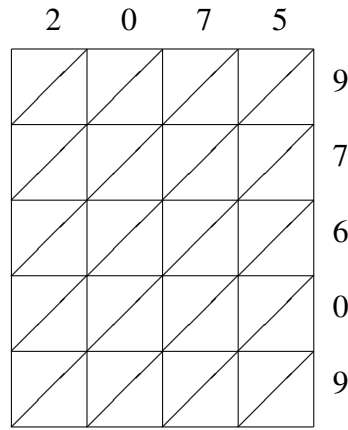


Lattice Multiplication (B)

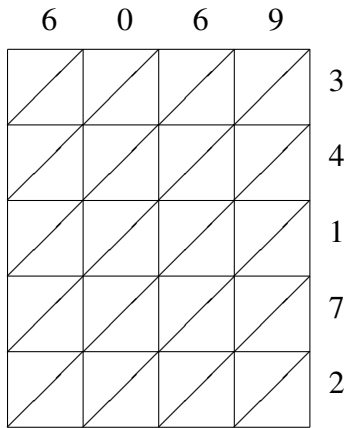
Use lattice multiplication to find each product.



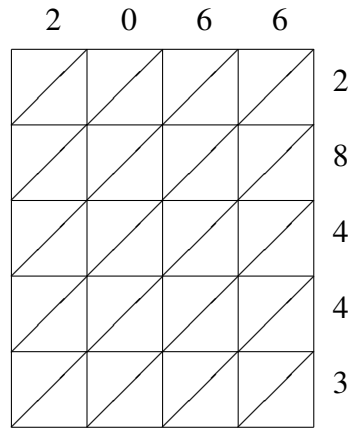
$$6938 \times 74418 = \underline{\hspace{2cm}}$$



$$2075 \times 97609 = \underline{\hspace{2cm}}$$



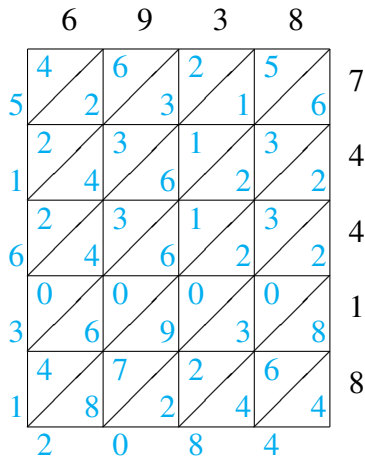
$$6069 \times 34172 = \underline{\hspace{2cm}}$$



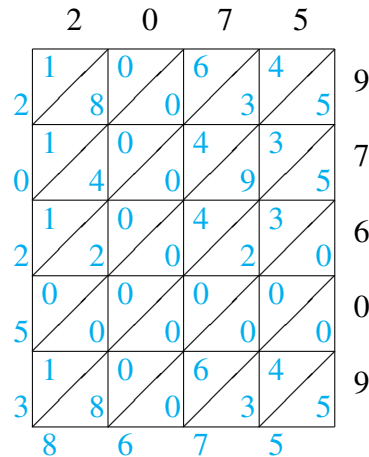
$$2066 \times 28443 = \underline{\hspace{2cm}}$$

Lattice Multiplication (B) Answers

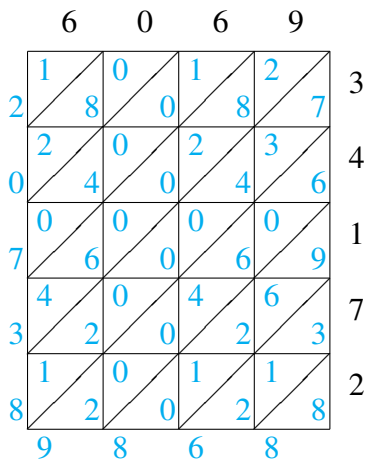
Use lattice multiplication to find each product.



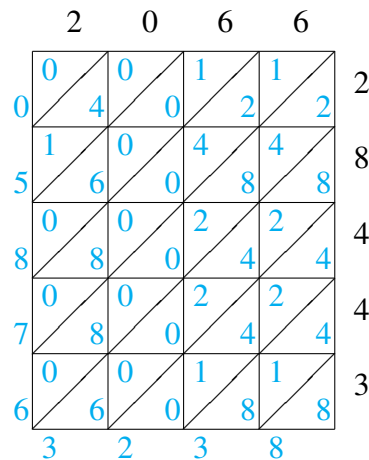
$$6938 \times 74418 = 516,312,084$$



$$2075 \times 97609 = 202,538,675$$



$$6069 \times 34172 = 207,389,868$$



$$2066 \times 28443 = 58,763,238$$