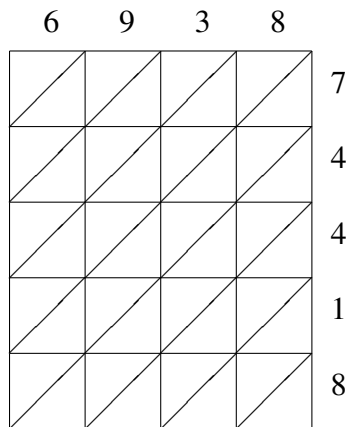
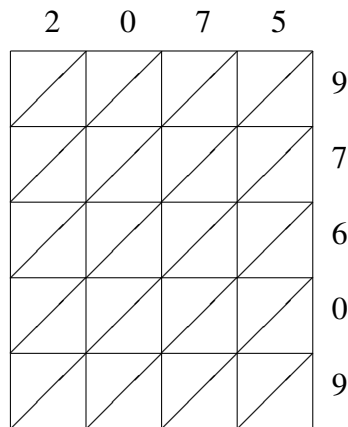


## Lattice Multiplication (B)

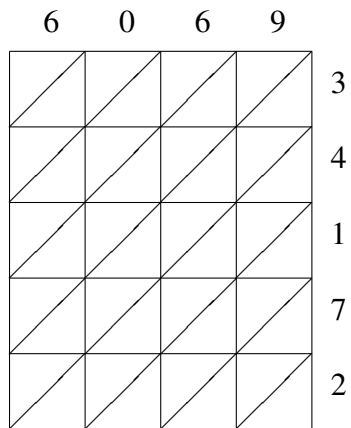
Use lattice multiplication to find each product.



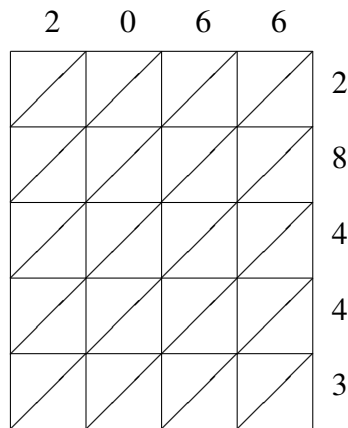
$$6938 \times 74418 = \underline{\hspace{2cm}}$$



$$2075 \times 97609 = \underline{\hspace{2cm}}$$



$$6069 \times 34172 = \underline{\hspace{2cm}}$$



$$2066 \times 28443 = \underline{\hspace{2cm}}$$