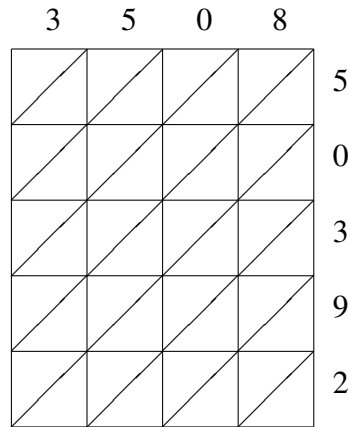
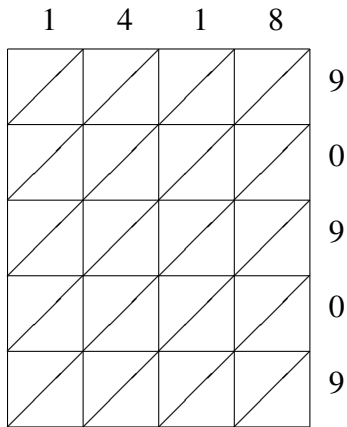


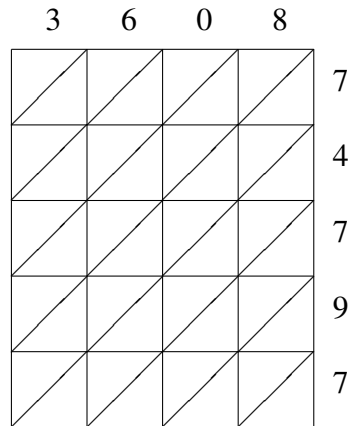
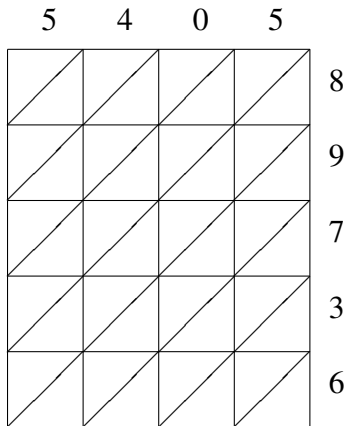
Lattice Multiplication (I)

Use lattice multiplication to find each product.



$1418 \times 90909 = \underline{\hspace{2cm}}$

$3508 \times 50392 = \underline{\hspace{2cm}}$



$5405 \times 89736 = \underline{\hspace{2cm}}$

$3608 \times 74797 = \underline{\hspace{2cm}}$