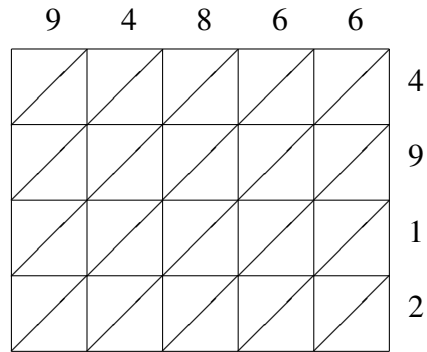
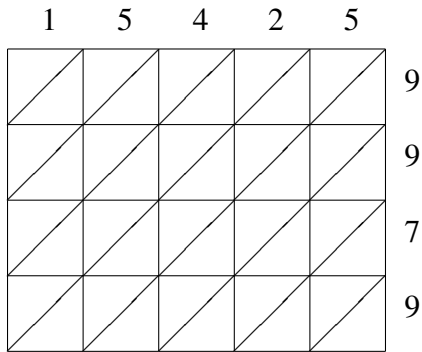


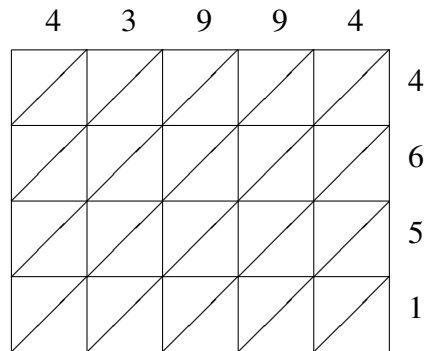
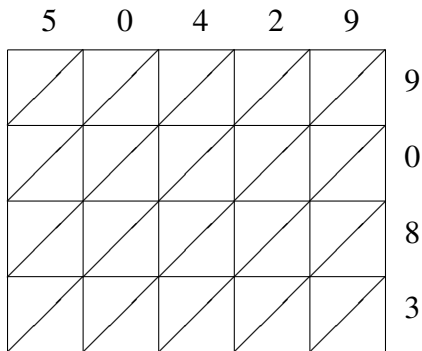
# Lattice Multiplication (A)

Use lattice multiplication to find each product.



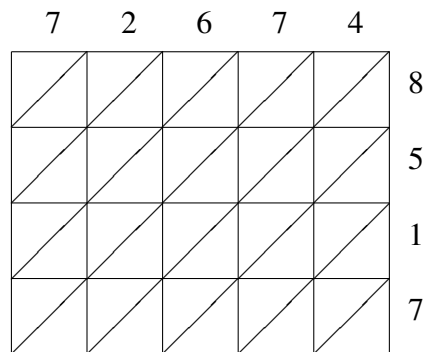
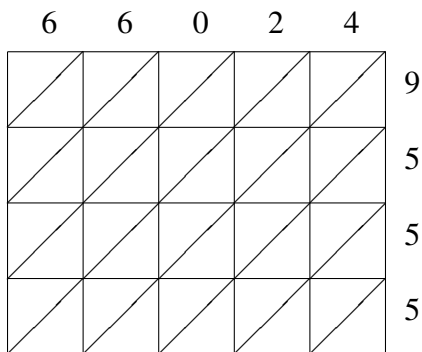
$15425 \times 9979 = \underline{\hspace{2cm}}$

$94866 \times 4912 = \underline{\hspace{2cm}}$



$50429 \times 9083 = \underline{\hspace{2cm}}$

$43994 \times 4651 = \underline{\hspace{2cm}}$

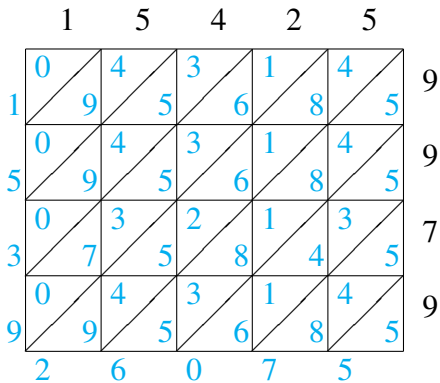


$66024 \times 9555 = \underline{\hspace{2cm}}$

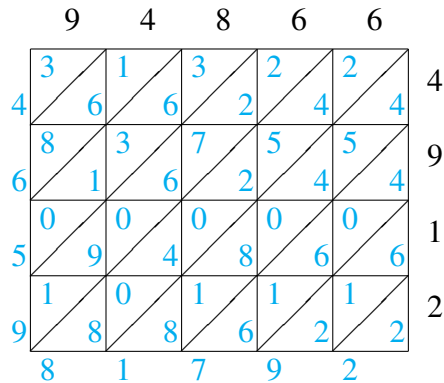
$72674 \times 8517 = \underline{\hspace{2cm}}$

# Lattice Multiplication (A) Answers

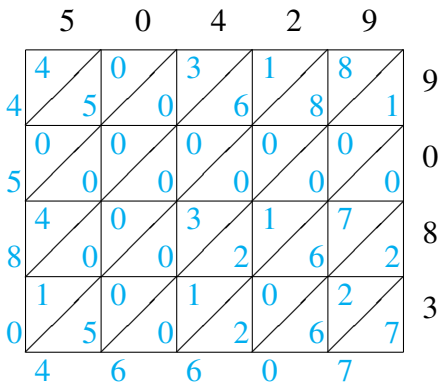
Use lattice multiplication to find each product.



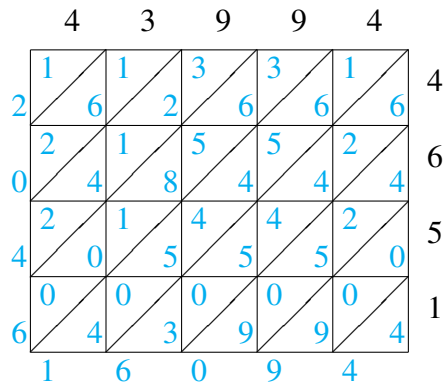
$$15425 \times 9979 = 153,926,075$$



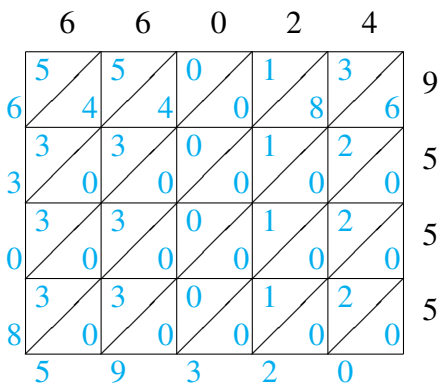
$$94866 \times 4912 = 465,981,792$$



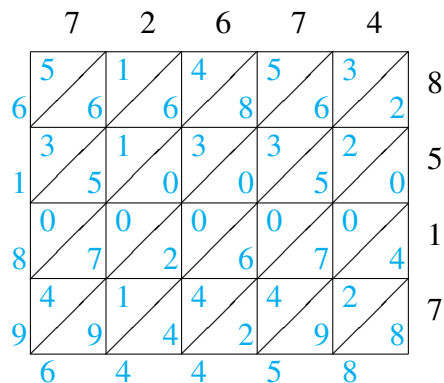
$$50429 \times 9083 = 458,046,607$$



$$43994 \times 4651 = 204,616,094$$



$$66024 \times 9555 = 630,859,320$$



$$72674 \times 8517 = 618,964,458$$