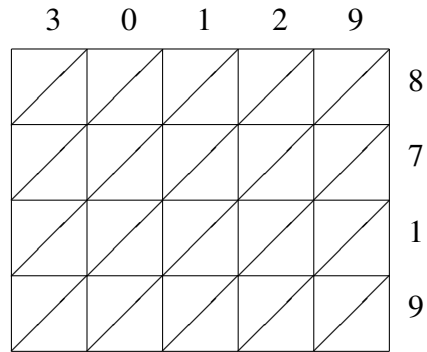
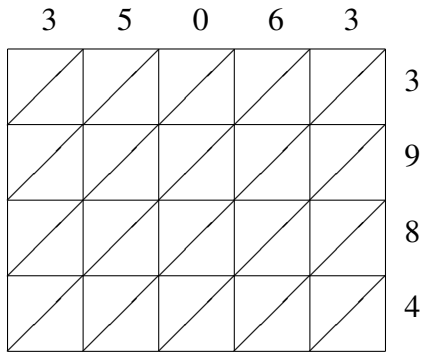


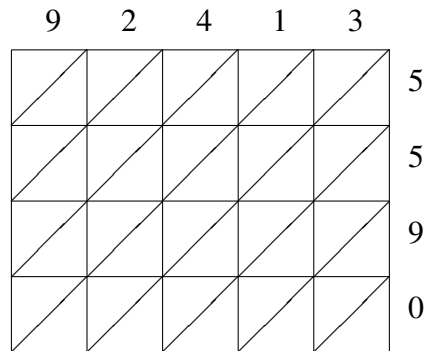
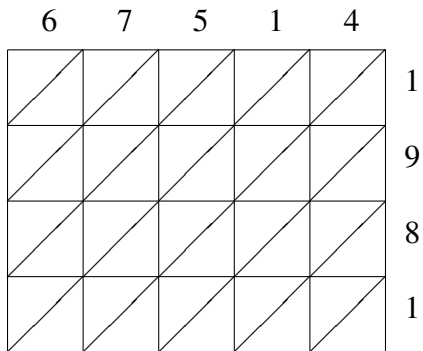
# Lattice Multiplication (G)

Use lattice multiplication to find each product.



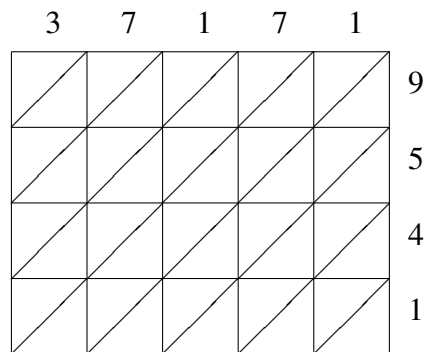
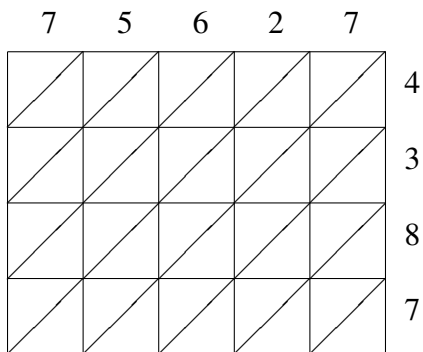
$35063 \times 3984 = \underline{\hspace{2cm}}$

$30129 \times 8719 = \underline{\hspace{2cm}}$



$67514 \times 1981 = \underline{\hspace{2cm}}$

$92413 \times 5590 = \underline{\hspace{2cm}}$



$75627 \times 4387 = \underline{\hspace{2cm}}$

$37171 \times 9541 = \underline{\hspace{2cm}}$