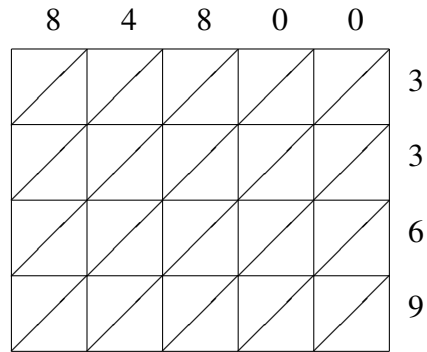
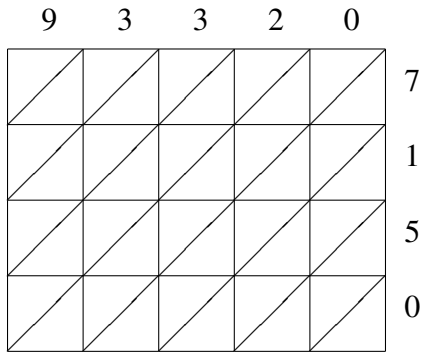


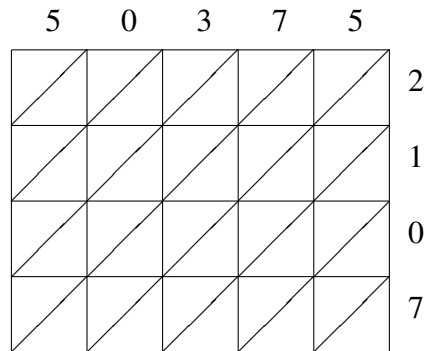
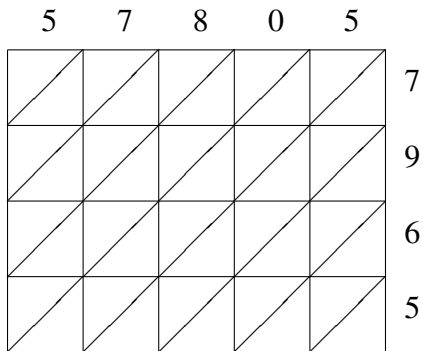
Lattice Multiplication (H)

Use lattice multiplication to find each product.



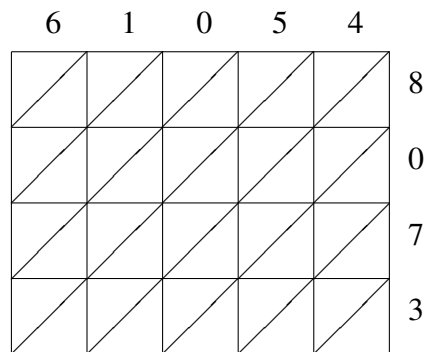
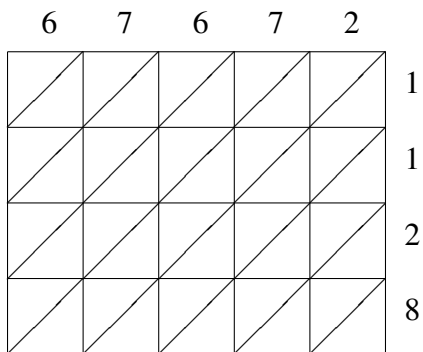
$93320 \times 7150 = \underline{\hspace{2cm}}$

$84800 \times 3369 = \underline{\hspace{2cm}}$



$57805 \times 7965 = \underline{\hspace{2cm}}$

$50375 \times 2107 = \underline{\hspace{2cm}}$

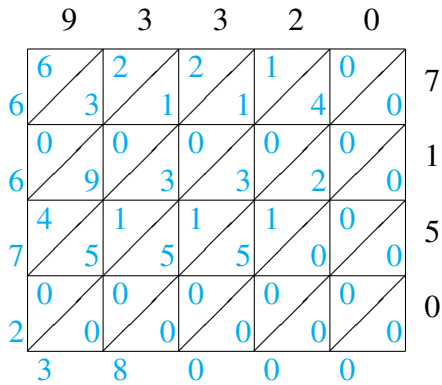


$67672 \times 1128 = \underline{\hspace{2cm}}$

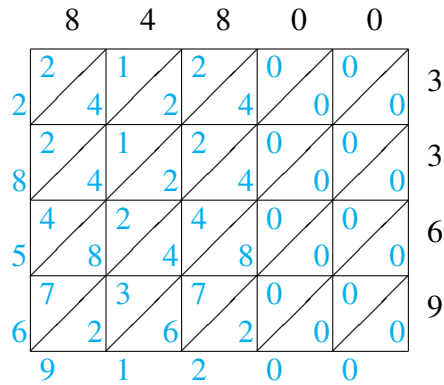
$61054 \times 8073 = \underline{\hspace{2cm}}$

Lattice Multiplication (H) Answers

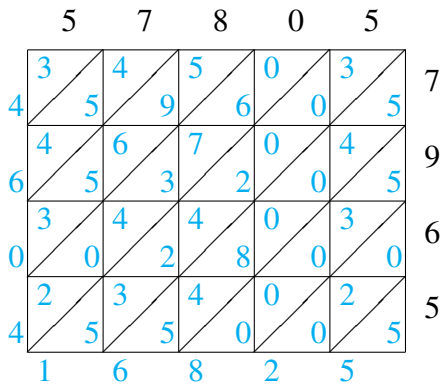
Use lattice multiplication to find each product.



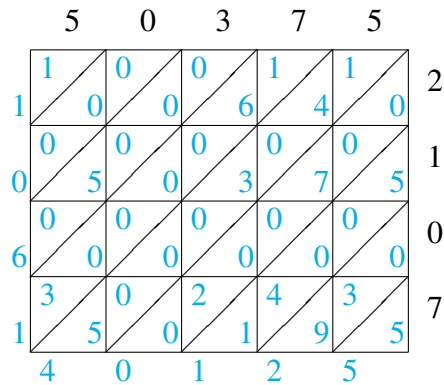
$$93320 \times 7150 = 667,238,000$$



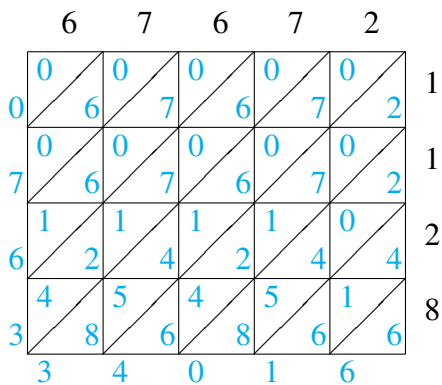
$$84800 \times 3369 = 285,691,200$$



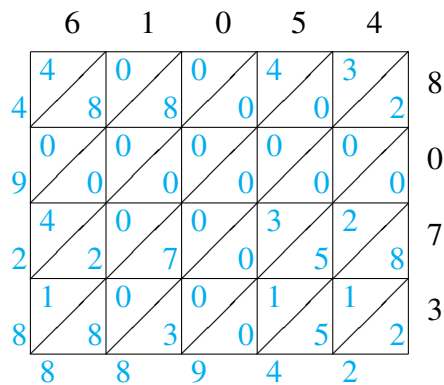
$$57805 \times 7965 = 460,416,825$$



$$50375 \times 2107 = 106,140,125$$



$$67672 \times 1128 = 76,334,016$$



$$61054 \times 8073 = 492,888,942$$