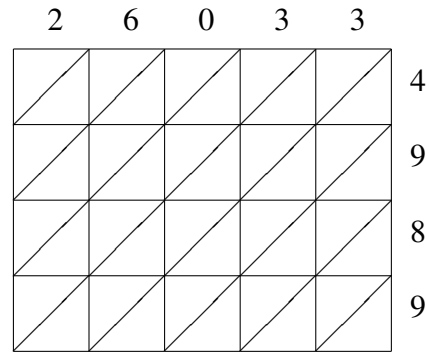
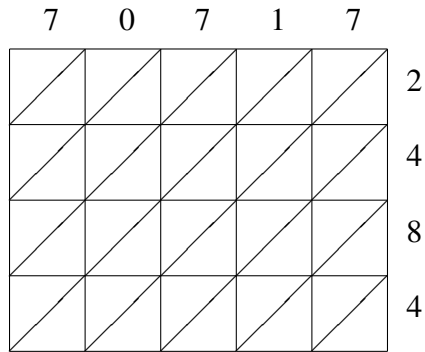


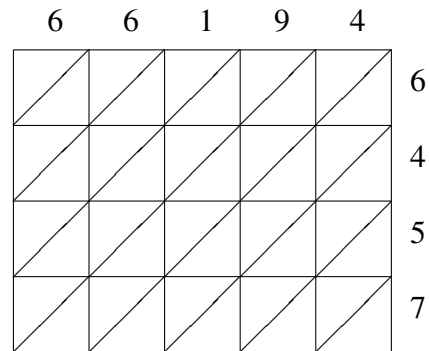
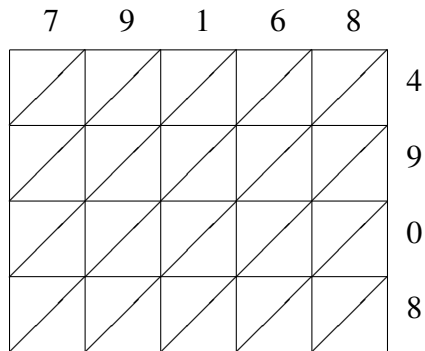
Lattice Multiplication (I)

Use lattice multiplication to find each product.



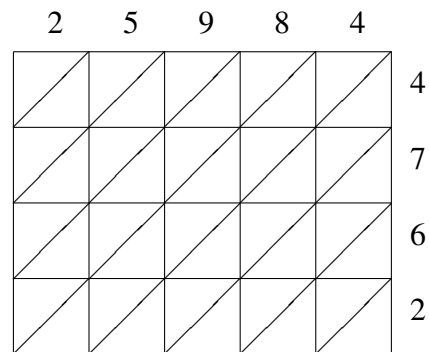
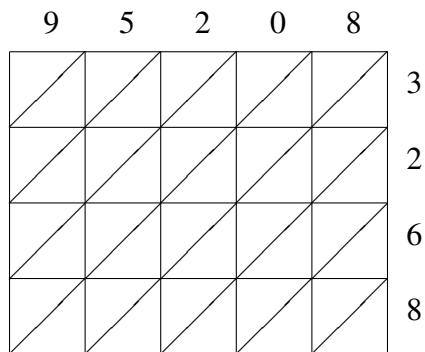
$70717 \times 2484 = \underline{\hspace{2cm}}$

$26033 \times 4989 = \underline{\hspace{2cm}}$



$79168 \times 4908 = \underline{\hspace{2cm}}$

$66194 \times 6457 = \underline{\hspace{2cm}}$



$95208 \times 3268 = \underline{\hspace{2cm}}$

$25984 \times 4762 = \underline{\hspace{2cm}}$