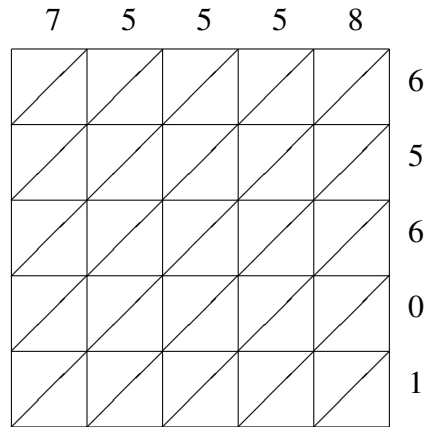
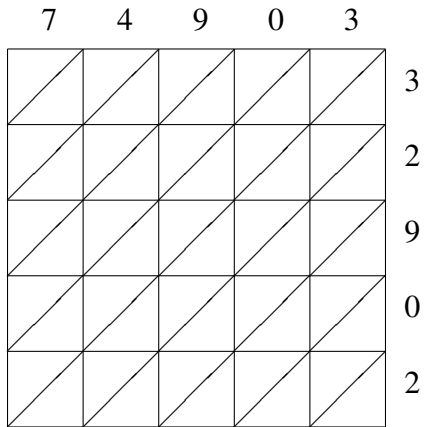


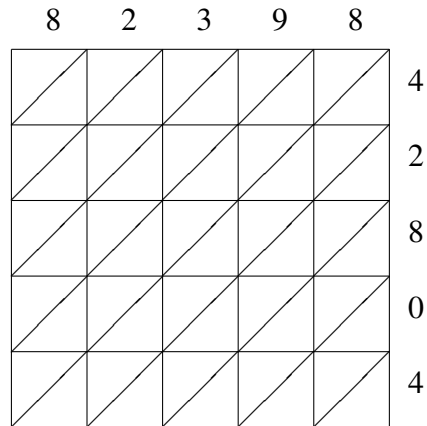
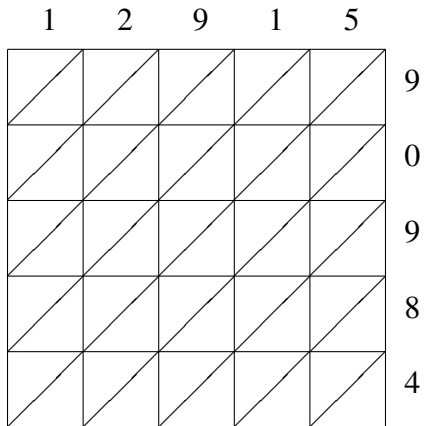
## Lattice Multiplication (B)

Use lattice multiplication to find each product.



$74903 \times 32902 = \underline{\hspace{10em}}$

$75558 \times 65601 = \underline{\hspace{10em}}$



$12915 \times 90984 = \underline{\hspace{10em}}$

$82398 \times 42804 = \underline{\hspace{10em}}$