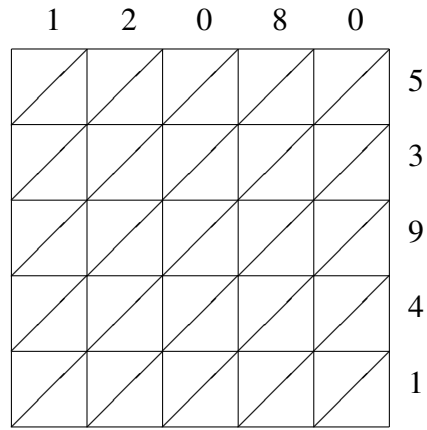
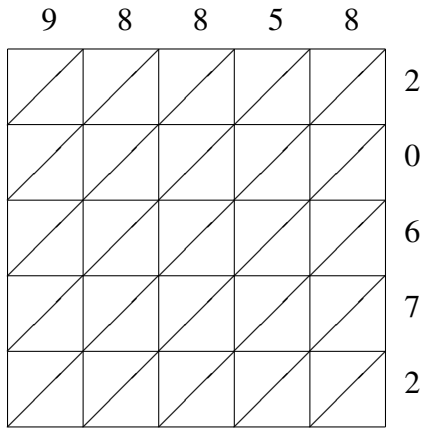


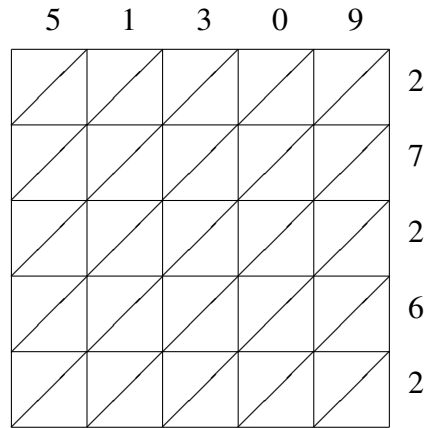
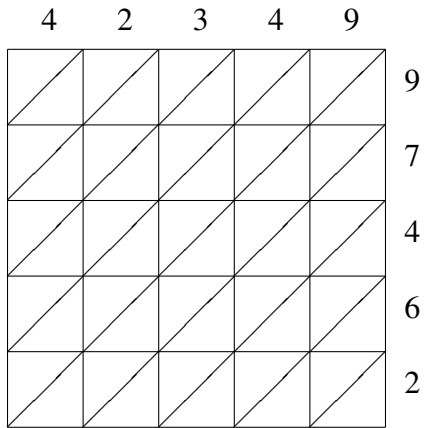
Lattice Multiplication (C)

Use lattice multiplication to find each product.



$98858 \times 20672 = \underline{\hspace{10em}}$

$12080 \times 53941 = \underline{\hspace{10em}}$



$42349 \times 97462 = \underline{\hspace{10em}}$

$51309 \times 27262 = \underline{\hspace{10em}}$