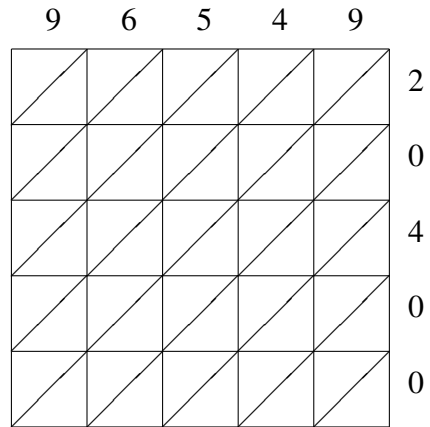
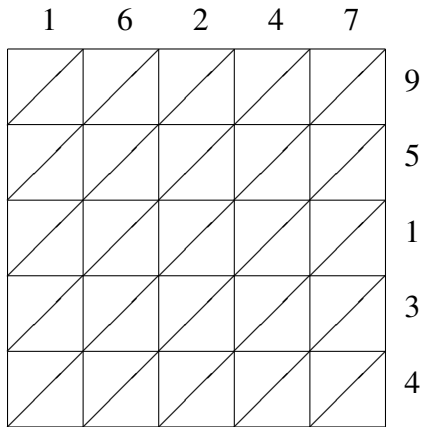


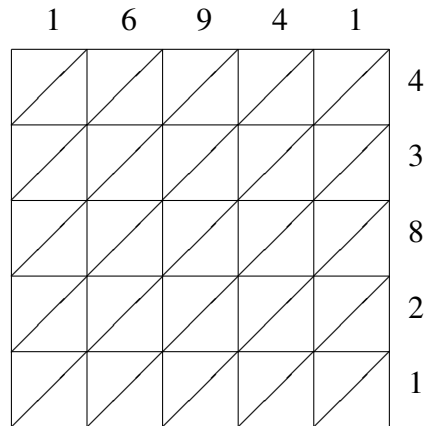
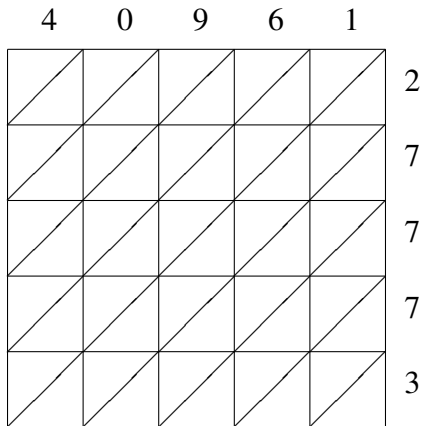
Lattice Multiplication (F)

Use lattice multiplication to find each product.



$16247 \times 95134 = \underline{\hspace{2cm}}$

$96549 \times 20400 = \underline{\hspace{2cm}}$



$40961 \times 27773 = \underline{\hspace{2cm}}$

$16941 \times 43821 = \underline{\hspace{2cm}}$