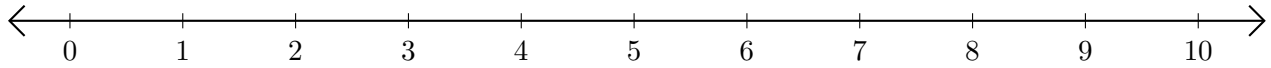


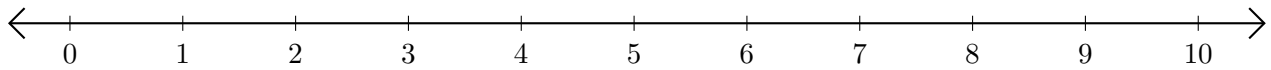
Adding on Number Lines (B)

Use the number lines to calculate each sum.

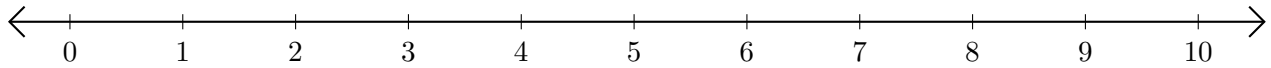
1. $6 + 2 = \underline{\quad}$



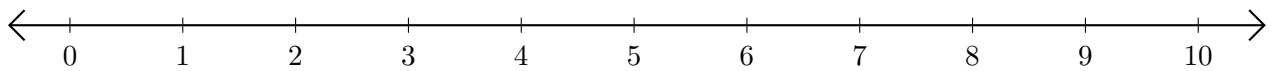
2. $2 + 2 = \underline{\quad}$



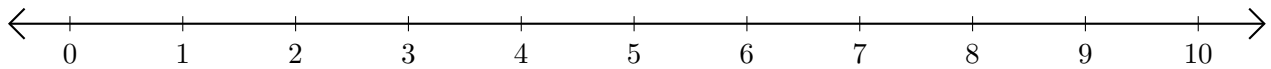
3. $9 + 1 = \underline{\quad}$



4. $5 + 3 = \underline{\quad}$



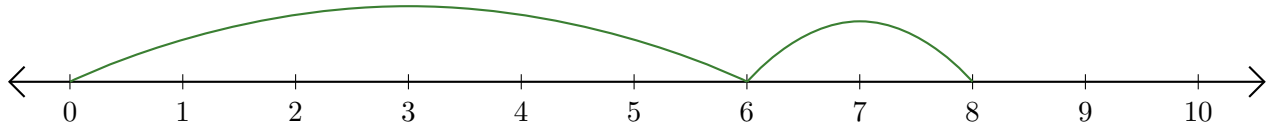
5. $8 + 2 = \underline{\quad}$



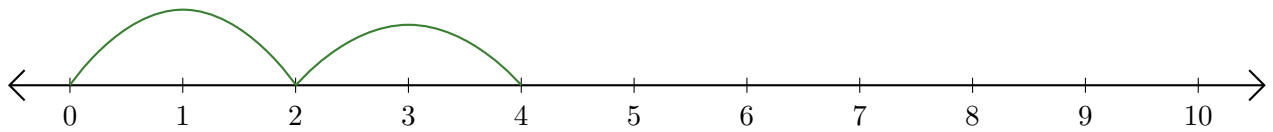
Adding on Number Lines (B) Answers

Use the number lines to calculate each sum.

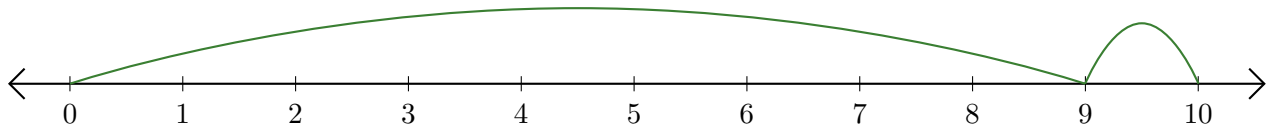
1. $6 + 2 = \underline{8}$



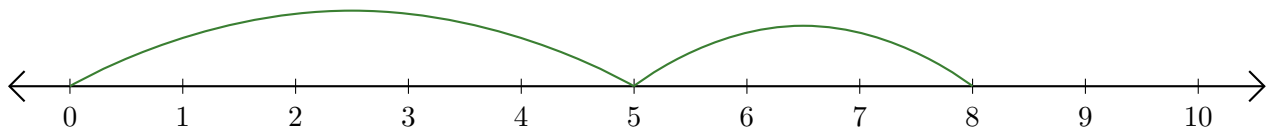
2. $2 + 2 = \underline{4}$



3. $9 + 1 = \underline{10}$



4. $5 + 3 = \underline{8}$



5. $8 + 2 = \underline{10}$

