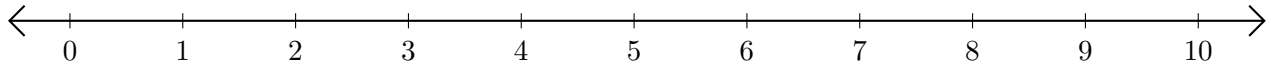


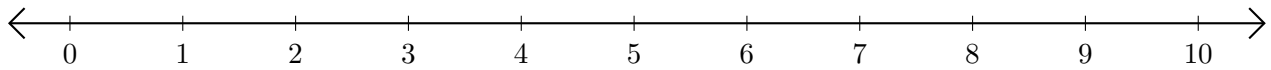
Adding on Number Lines (C)

Use the number lines to calculate each sum.

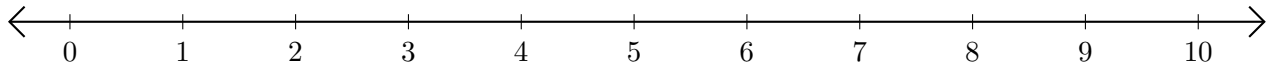
1. $3 + 6 = \underline{\quad}$



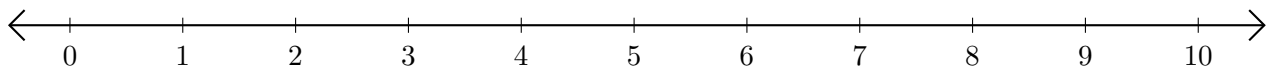
2. $7 + 3 = \underline{\quad}$



3. $1 + 8 = \underline{\quad}$



4. $6 + 1 = \underline{\quad}$



5. $4 + 1 = \underline{\quad}$

