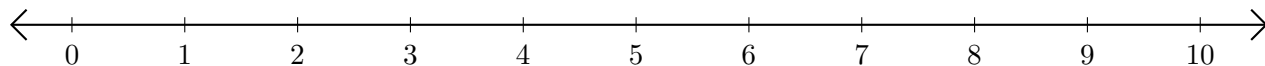


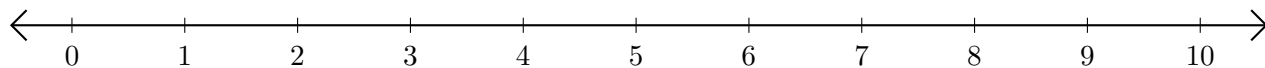
Adding on Number Lines (I)

Use the number lines to calculate each sum.

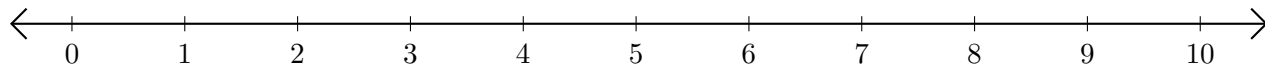
1. $2 + 5 = \underline{\quad}$



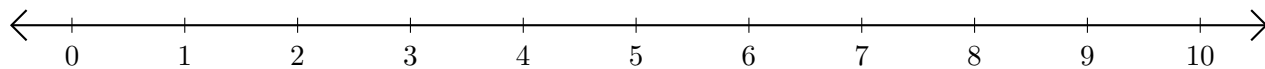
2. $9 + 1 = \underline{\quad}$



3. $3 + 6 = \underline{\quad}$



4. $5 + 4 = \underline{\quad}$



5. $7 + 3 = \underline{\quad}$

