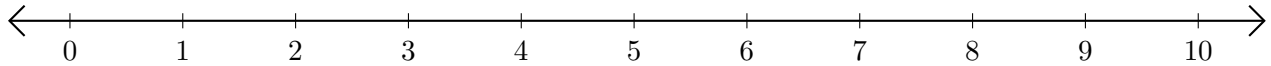


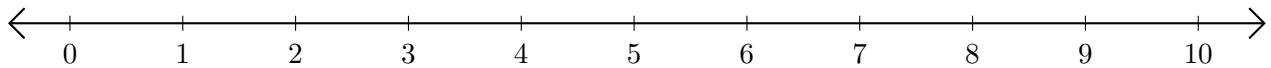
Adding on Number Lines (J)

Use the number lines to calculate each sum.

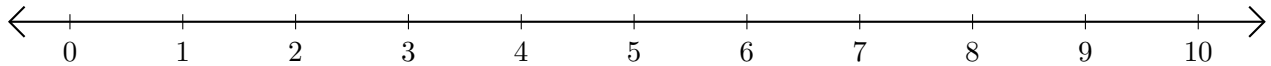
1. $5 + 2 = \underline{\quad}$



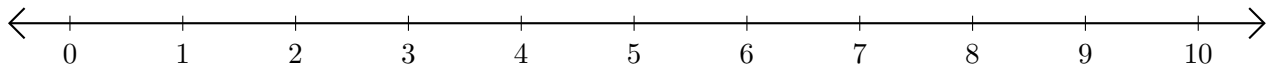
2. $9 + 1 = \underline{\quad}$



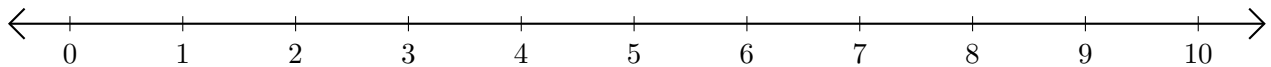
3. $3 + 4 = \underline{\quad}$



4. $8 + 2 = \underline{\quad}$



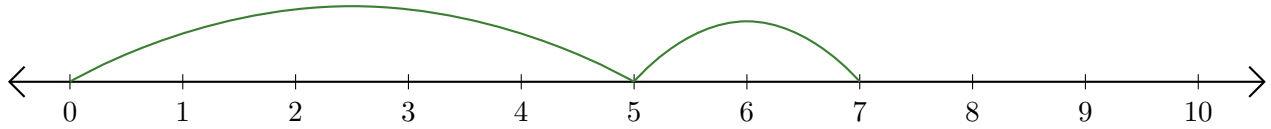
5. $1 + 3 = \underline{\quad}$



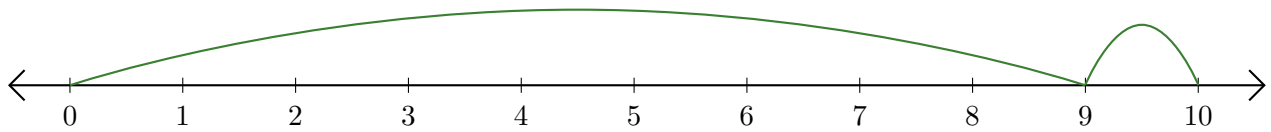
Adding on Number Lines (J) Answers

Use the number lines to calculate each sum.

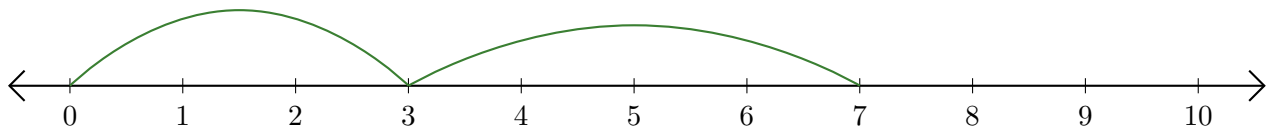
1. $5 + 2 = \underline{7}$



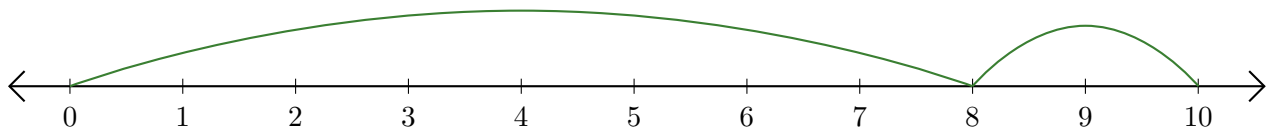
2. $9 + 1 = \underline{10}$



3. $3 + 4 = \underline{7}$



4. $8 + 2 = \underline{10}$



5. $1 + 3 = \underline{4}$

