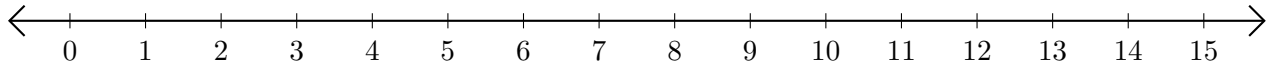


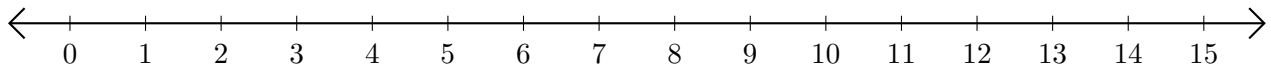
Adding on Number Lines (A)

Use the number lines to calculate each sum.

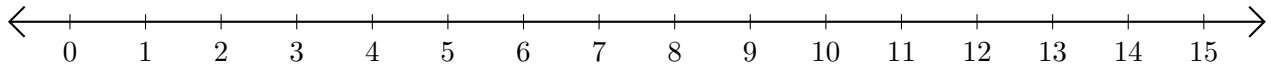
1. $6 + 8 = \underline{\quad}$



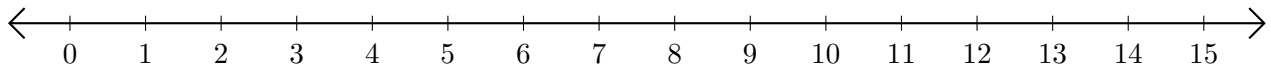
2. $14 + 1 = \underline{\quad}$



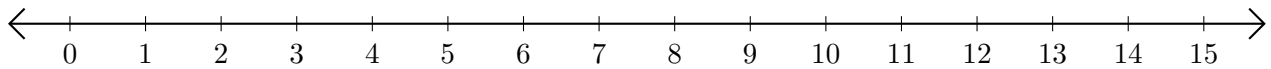
3. $2 + 10 = \underline{\quad}$



4. $12 + 3 = \underline{\quad}$



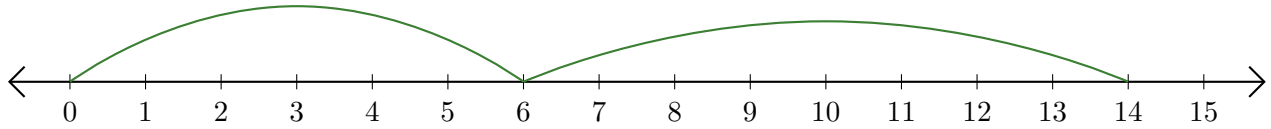
5. $1 + 13 = \underline{\quad}$



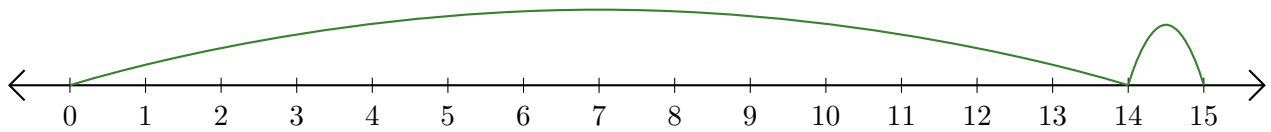
Adding on Number Lines (A) Answers

Use the number lines to calculate each sum.

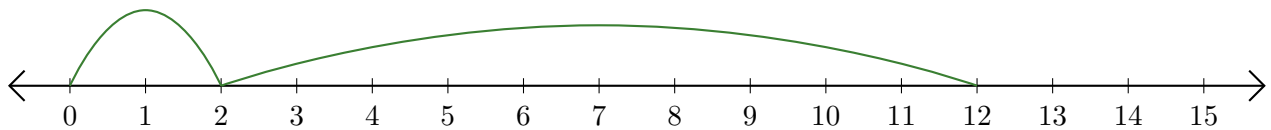
1. $6 + 8 = \underline{14}$



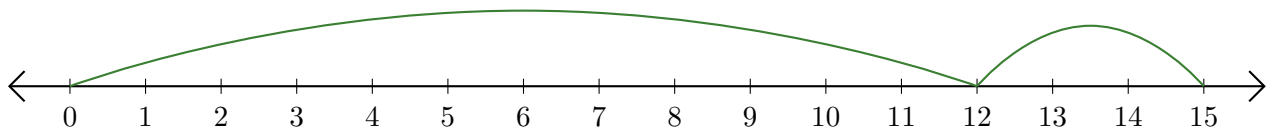
2. $14 + 1 = \underline{15}$



3. $2 + 10 = \underline{12}$



4. $12 + 3 = \underline{15}$



5. $1 + 13 = \underline{14}$

