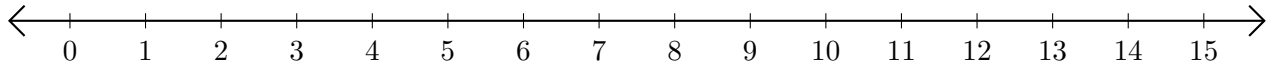


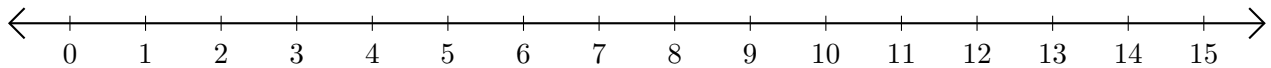
Adding on Number Lines (C)

Use the number lines to calculate each sum.

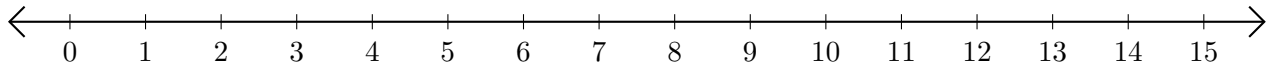
1. $14 + 1 = \underline{\quad}$



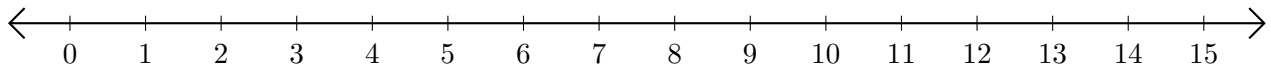
2. $5 + 5 = \underline{\quad}$



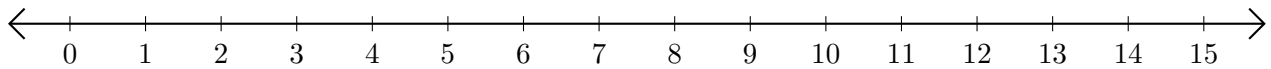
3. $4 + 1 = \underline{\quad}$



4. $3 + 5 = \underline{\quad}$



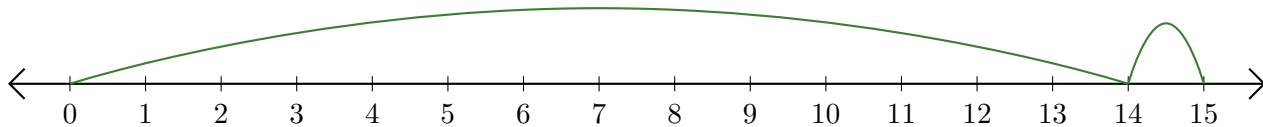
5. $6 + 9 = \underline{\quad}$



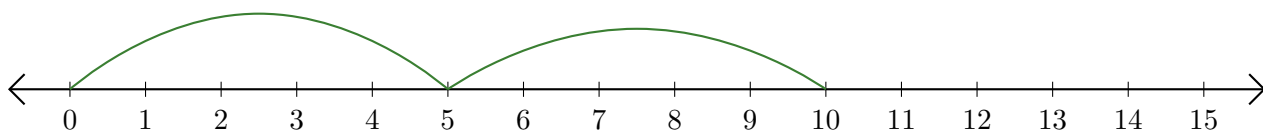
Adding on Number Lines (C) Answers

Use the number lines to calculate each sum.

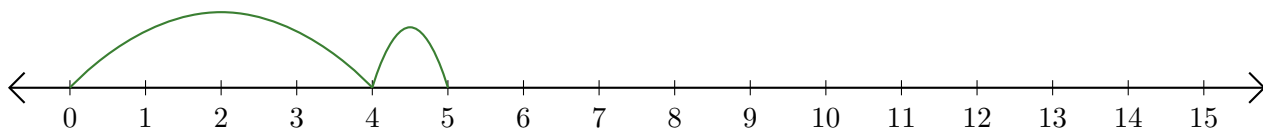
1. $14 + 1 = \underline{15}$



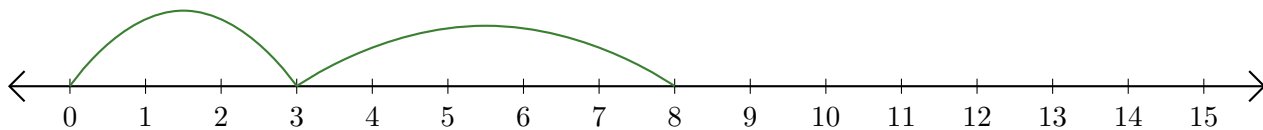
2. $5 + 5 = \underline{10}$



3. $4 + 1 = \underline{5}$



4. $3 + 5 = \underline{8}$



5. $6 + 9 = \underline{15}$

