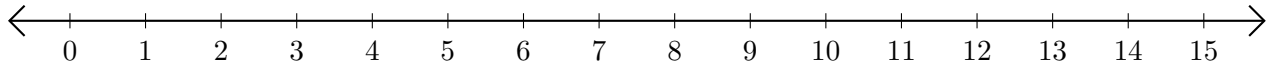


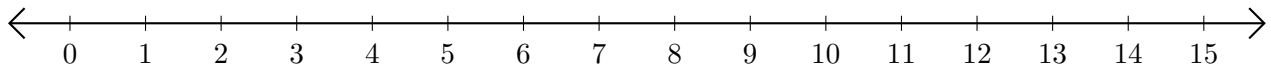
Adding on Number Lines (D)

Use the number lines to calculate each sum.

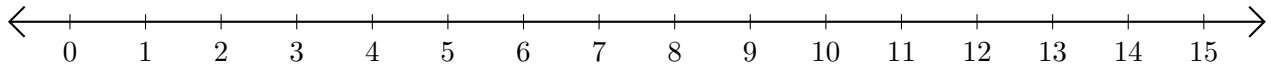
1. $6 + 1 = \underline{\quad}$



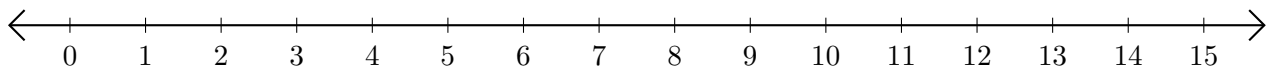
2. $2 + 7 = \underline{\quad}$



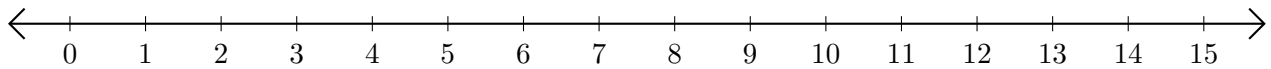
3. $1 + 14 = \underline{\quad}$



4. $7 + 3 = \underline{\quad}$



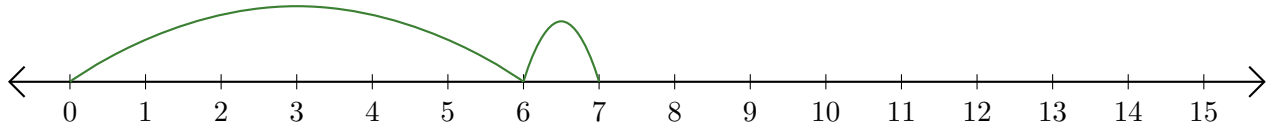
5. $11 + 1 = \underline{\quad}$



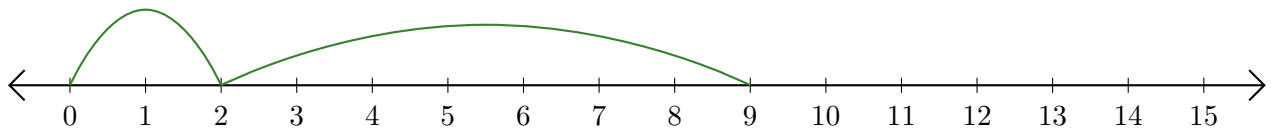
Adding on Number Lines (D) Answers

Use the number lines to calculate each sum.

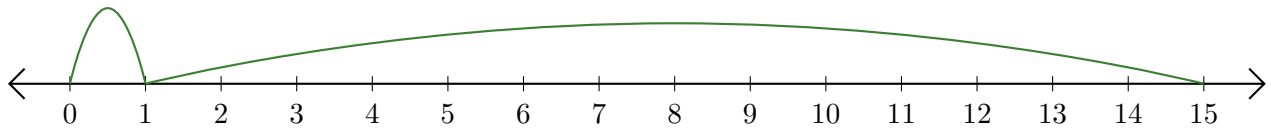
1. $6 + 1 = \underline{7}$



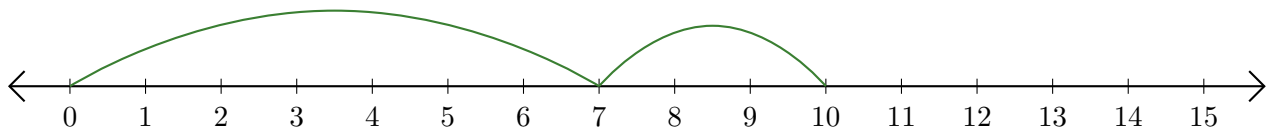
2. $2 + 7 = \underline{9}$



3. $1 + 14 = \underline{15}$



4. $7 + 3 = \underline{10}$



5. $11 + 1 = \underline{12}$

