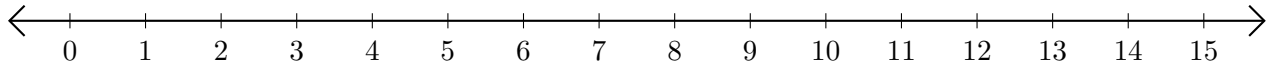


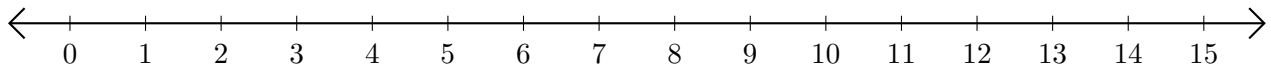
Adding on Number Lines (H)

Use the number lines to calculate each sum.

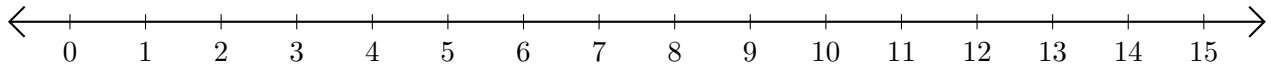
1. $11 + 3 = \underline{\quad}$



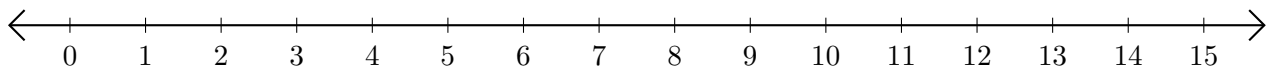
2. $1 + 7 = \underline{\quad}$



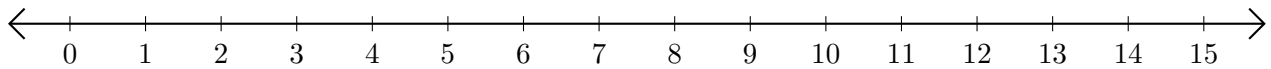
3. $14 + 1 = \underline{\quad}$



4. $13 + 1 = \underline{\quad}$



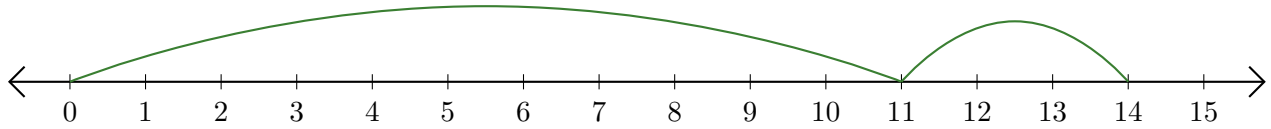
5. $7 + 5 = \underline{\quad}$



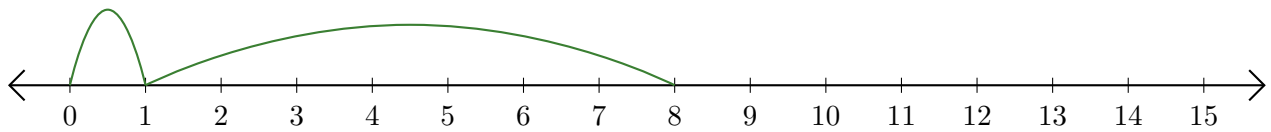
Adding on Number Lines (H) Answers

Use the number lines to calculate each sum.

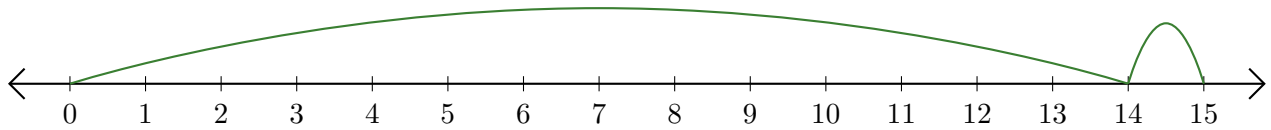
1. $11 + 3 = \underline{14}$



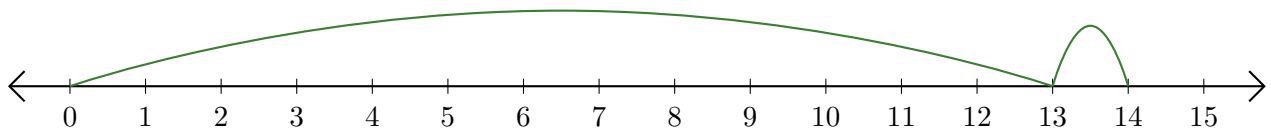
2. $1 + 7 = \underline{8}$



3. $14 + 1 = \underline{15}$



4. $13 + 1 = \underline{14}$



5. $7 + 5 = \underline{12}$

