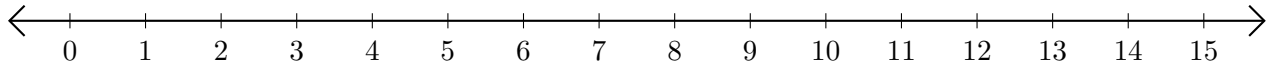


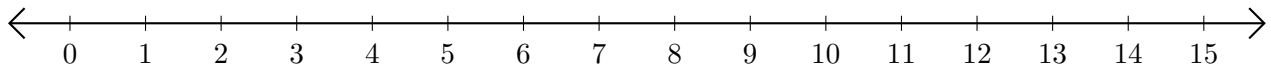
# Adding on Number Lines (H)

Use the number lines to calculate each sum.

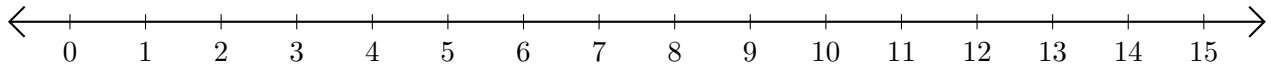
1.  $11 + 3 = \underline{\quad}$



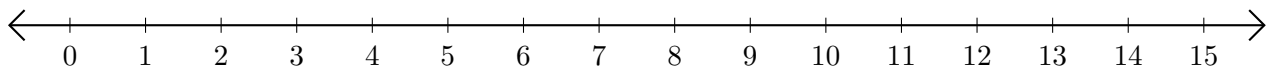
2.  $1 + 7 = \underline{\quad}$



3.  $14 + 1 = \underline{\quad}$



4.  $13 + 1 = \underline{\quad}$



5.  $7 + 5 = \underline{\quad}$

