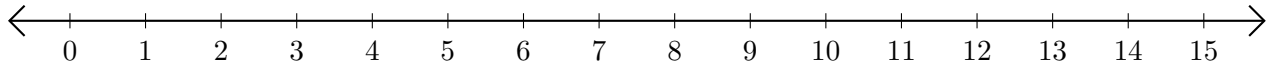


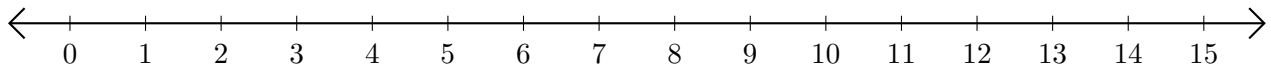
Adding on Number Lines (I)

Use the number lines to calculate each sum.

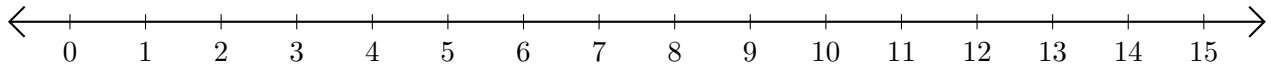
1. $10 + 1 = \underline{\quad}$



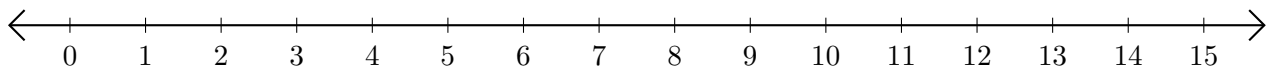
2. $2 + 12 = \underline{\quad}$



3. $8 + 3 = \underline{\quad}$



4. $7 + 1 = \underline{\quad}$



5. $1 + 4 = \underline{\quad}$

