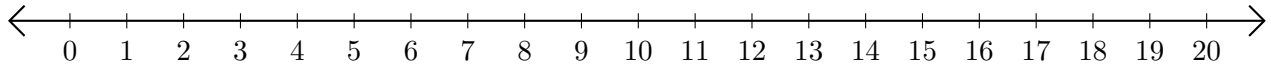


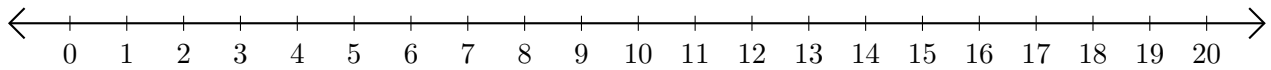
Adding on Number Lines (A)

Use the number lines to calculate each sum.

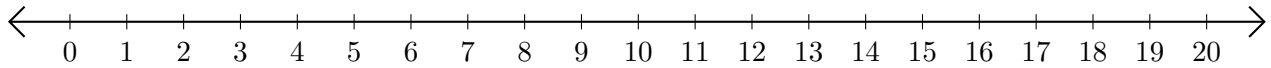
1. $19 + 1 = \underline{\quad}$



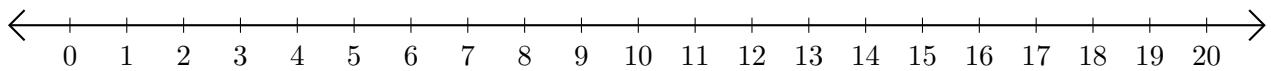
2. $16 + 4 = \underline{\quad}$



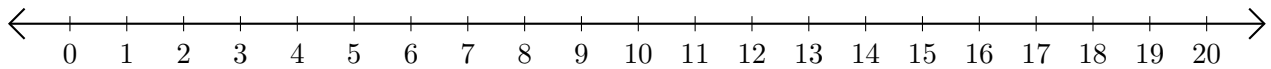
3. $6 + 11 = \underline{\quad}$



4. $5 + 9 = \underline{\quad}$



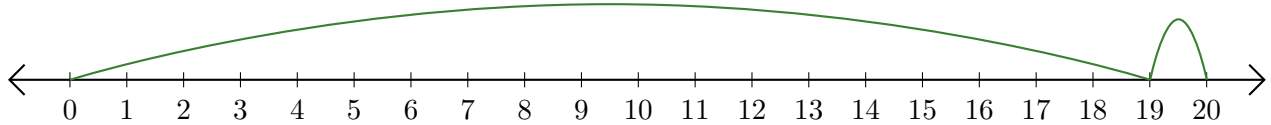
5. $7 + 6 = \underline{\quad}$



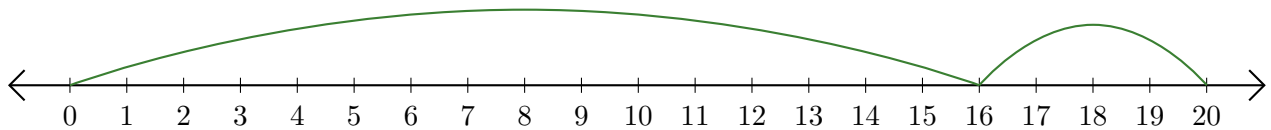
Adding on Number Lines (A) Answers

Use the number lines to calculate each sum.

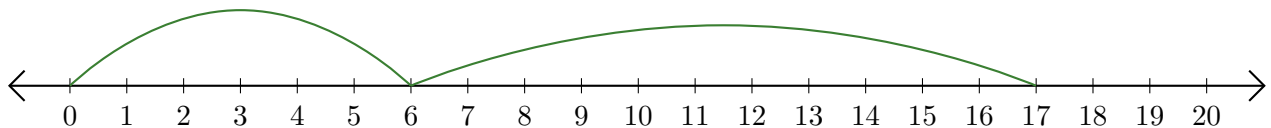
1. $19 + 1 = \underline{20}$



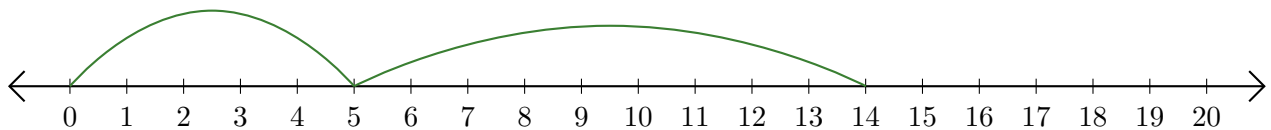
2. $16 + 4 = \underline{20}$



3. $6 + 11 = \underline{17}$



4. $5 + 9 = \underline{14}$



5. $7 + 6 = \underline{13}$

