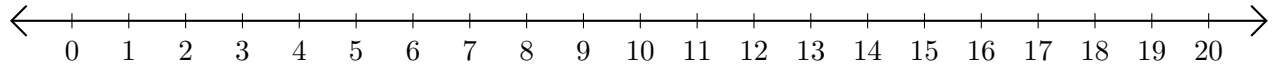


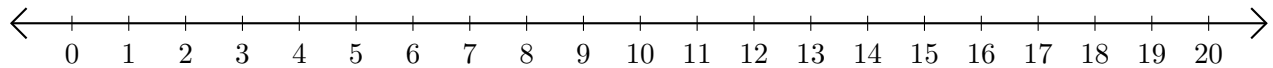
Adding on Number Lines (B)

Use the number lines to calculate each sum.

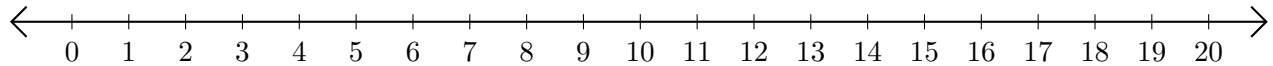
1. $1 + 19 = \underline{\quad}$



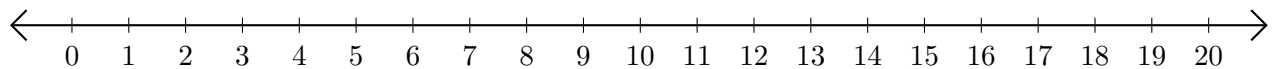
2. $11 + 5 = \underline{\quad}$



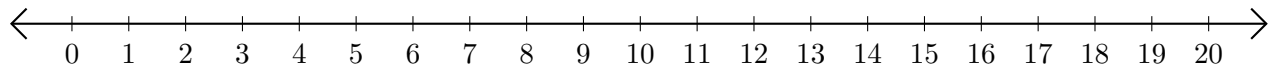
3. $19 + 1 = \underline{\quad}$



4. $15 + 1 = \underline{\quad}$



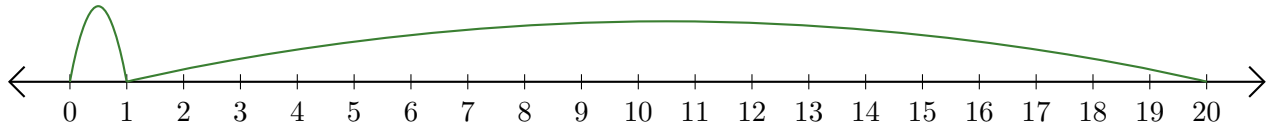
5. $8 + 2 = \underline{\quad}$



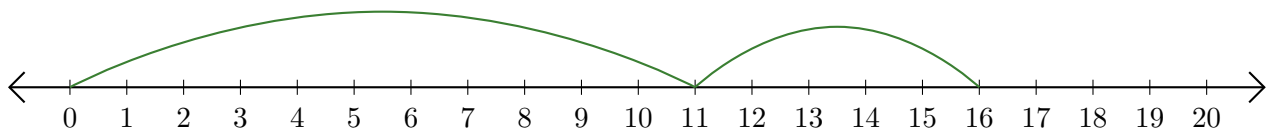
Adding on Number Lines (B) Answers

Use the number lines to calculate each sum.

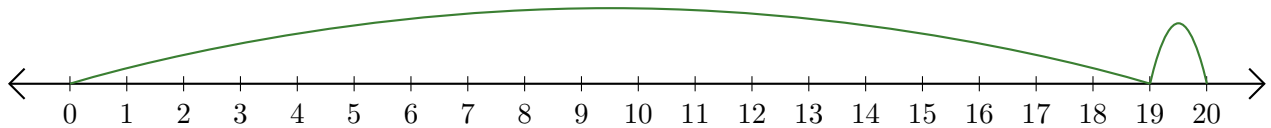
1. $1 + 19 = \underline{20}$



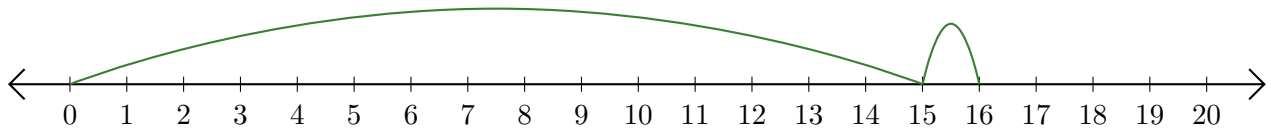
2. $11 + 5 = \underline{16}$



3. $19 + 1 = \underline{20}$



4. $15 + 1 = \underline{16}$



5. $8 + 2 = \underline{10}$

