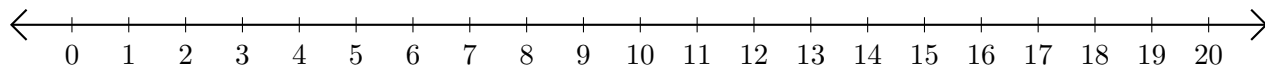


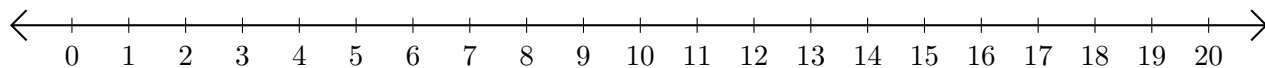
# Adding on Number Lines (B)

Use the number lines to calculate each sum.

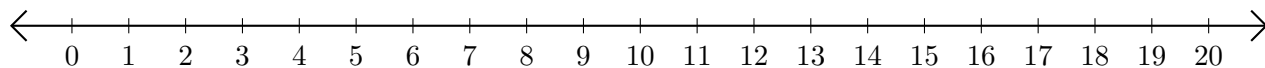
1.  $1 + 19 = \underline{\quad}$



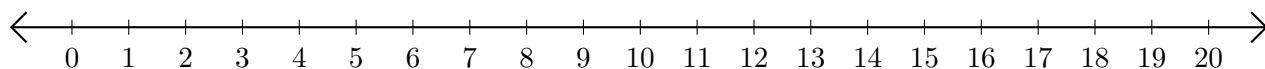
2.  $11 + 5 = \underline{\quad}$



3.  $19 + 1 = \underline{\quad}$



4.  $15 + 1 = \underline{\quad}$



5.  $8 + 2 = \underline{\quad}$

