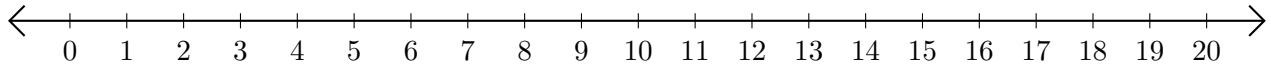


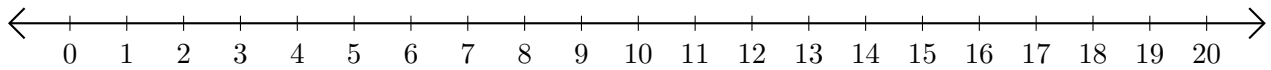
Adding on Number Lines (C)

Use the number lines to calculate each sum.

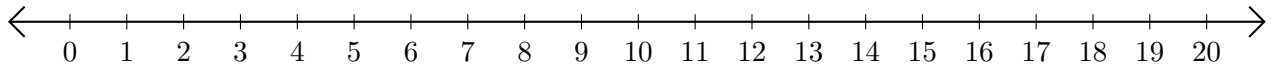
1. $17 + 2 = \underline{\quad}$



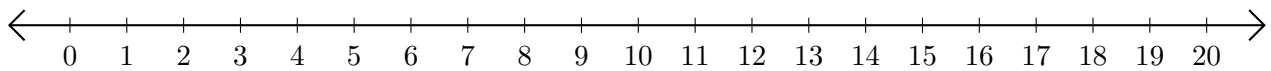
2. $5 + 12 = \underline{\quad}$



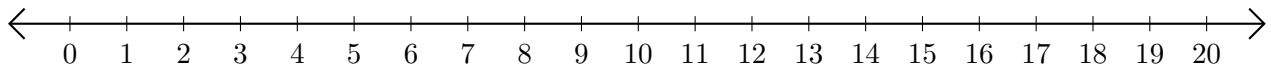
3. $15 + 3 = \underline{\quad}$



4. $9 + 10 = \underline{\quad}$



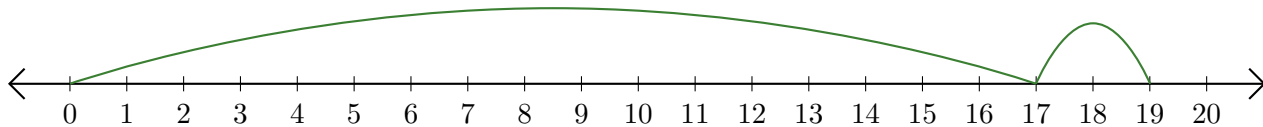
5. $19 + 1 = \underline{\quad}$



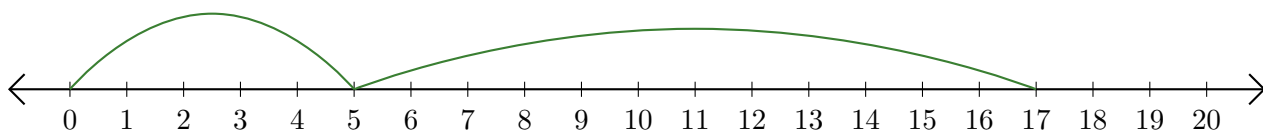
Adding on Number Lines (C) Answers

Use the number lines to calculate each sum.

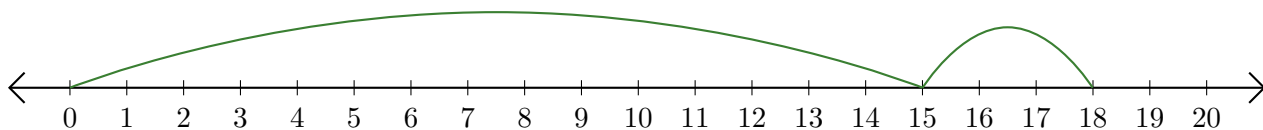
1. $17 + 2 = \underline{19}$



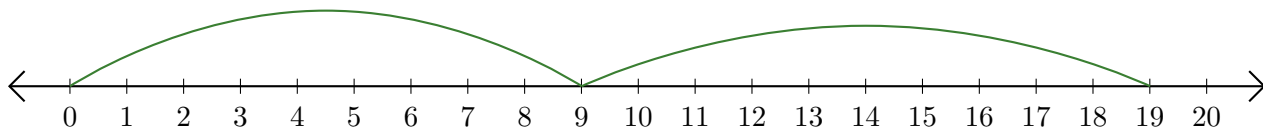
2. $5 + 12 = \underline{17}$



3. $15 + 3 = \underline{18}$



4. $9 + 10 = \underline{19}$



5. $19 + 1 = \underline{20}$

